

PRACTICE **MOCK**

GET IT ON  
Google Play



# CRACK SSC EXAMS

WITH QUALITY MOCK TEST SERIES

SSC GD  
CONSTABLE

~~199/-~~  
**159/-**

PM SSC  
PRO  
6 MONTHS

**249/-**

PM SSC  
PRO  
12 MONTHS

**399/-**

PM PREMIUM  
PACKAGE  
Banking, SSC & Others

**999/-**

## Features

- \* Free PDFs
- \* Test Series
- \* Live Mocks
- \* Free Classes
- \* Free Quizzes

SSC GD Constable Free  
Crash Course 2022

**Previous Year Paper**

DOWNLOAD **FREE** PDF





Exam Date	29/11/2021
Exam Time :	12:30 PM - 2:00 PM
Subject	Constable GD 2021

## Section : Part A General Intelligence and Reasoning

**Q.1** Select the letter-cluster from among the given options that can replace the question mark (?) in the following series.

AU, BO, CI, DE, ?

- Ans
- ✓ 1. EA
  - ✗ 2. HU
  - ✗ 3. FI
  - ✗ 4. GE

Question ID : 65497832911

Status : Answered

Chosen Option : 1

**Q.2** Select the correct mirror image of the given combination when the mirror is placed at PQ as shown.

BD9SKC |

- Ans
- ✗ 1. BDESKC
  - ✗ 2. BDESKC
  - ✓ 3. BDAKCB
  - ✗ 4. BD9SKC

Question ID : 65497832931

Status : Answered

Chosen Option : 3

**Q.3** Select the number from among the given options that can replace the question mark (?) in the following series.

9, 28, 65, 126, ?, 344

- Ans
- ✗ 1. 225
  - ✗ 2. 191
  - ✗ 3. 218
  - ✓ 4. 217

Question ID : 65497832930

Status : Answered

Chosen Option : 4

Q.4 'Dementia' is related to 'Memory' in the same way as 'Insomnia' is related to \_\_\_\_\_.

- Ans
- 1. Walk
  - 2. Sleep
  - 3. Run
  - 4. Forgetting

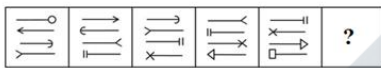
Question ID : 65497832912  
Status : Answered  
Chosen Option : 2

Q.5 In a certain code language, 'FAMILY' is written as 'QXBJSD'. How will 'FILMY' be written in the that language?

- Ans
- 1. QXBSD
  - 2. QDSBX
  - 3. QBJSD
  - 4. QJSBD

Question ID : 65497832923  
Status : Answered  
Chosen Option : 4

Q.6 Select the figure from among the given options that can replace the question mark (?) in the following series.



- Ans
- 1.
  - 2.
  - 3.
  - 4.

Question ID : 65497832935  
Status : Answered  
Chosen Option : 3

Q.7 Select the combination of letters that when sequentially placed in the blanks of the given series will complete the series.

K \_ T \_ STKM \_ RST \_ MTRS \_ KM \_ RST

- Ans
- 1. M, T, R, K, T, R
  - 2. K, M, R, T, T, T
  - 3. K, T, R, M, T, R
  - 4. M, R, T, K, T, T

Question ID : 65497832933  
Status : Answered  
Chosen Option : 4

Q.8 Four letter-clusters have been given, out of which three are alike in some manner and one is different. Select the letter-cluster that is different.

- Ans
- 1. VAQ
  - 2. XED
  - 3. ZOV
  - 4. WRU

Question ID : 65497832928  
Status : Not Attempted and Marked For Review  
Chosen Option : --

Q.9 Study the given pattern carefully and select the number that can replace the question mark (?) in it.

26 18 13  
50 21 46  
626 ? 123

- Ans
- 1. 246
  - 2. 303
  - 3. 313
  - 4. 324

Question ID : 65497832925  
Status : Not Attempted and Marked For Review  
Chosen Option : --

Q.10 Select the option that is related to the third number in the same way as the second number is related to the first number.

234 : 171 :: 2535 : ?

- Ans
- 1. 4838
  - 2. 2393
  - 3. 6414
  - 4. 3787

Question ID : 65497832919  
Status : Answered  
Chosen Option : 3

Q.11 Select the option in which the given figure is embedded.




Ans

✓ 1.



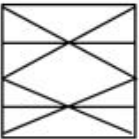
✗ 2.



✗ 3.



✗ 4.



Question ID : 65497832922

Status : Answered

Chosen Option : 1

Q.12 Select the number from among the given options that can replace the question mark (?) in the following series.

21, 22, 18, 27, 11, 36, ?

Ans ✗ 1. 2

✓ 2. 0

✗ 3. 27

✗ 4. 72

Question ID : 65497832934

Status : Answered

Chosen Option : 2

Q.13 In a row, Mansi is 29th from the left and 33rd from the right. How many students are there in the row?

Ans ✗ 1. 55

✓ 2. 61

✗ 3. 60

✗ 4. 65

Question ID : 65497832918

Status : Answered

Chosen Option : 2

Q.14 Select the correct combination of mathematical signs that can sequentially replace the '@' signs and balance the given equation.

$$13 @ 4 @ 5 @ 57$$

- Ans
- 1.  $\times, -, =$
  - 2.  $\times, +, =$
  - 3.  $+, \times, =$
  - 4.  $+, -, =$

Question ID : 65497832920  
Status : Answered  
Chosen Option : 2

Q.15 A class has a total of 60 students. Student 'B' is at 41st rank in merit order from the bottom. What is the rank of student 'B' from the top?

- Ans
- 1. 21st
  - 2. 23rd
  - 3. 20th
  - 4. 22nd

Question ID : 65497832915  
Status : Answered  
Chosen Option : 3

Q.16 In a certain code language, 'KNOW' is coded as '1614154'. How will 'HIRE' be coded in that language?

- Ans
- 1. 18191822
  - 2. 89185
  - 3. 1991822
  - 4. 199922

Question ID : 65497832929  
Status : Answered  
Chosen Option : 3

Q.17 Select the correct option that indicates the arrangement of the given words in the order in which they appear in an English dictionary.

1. Poverty
2. Pretension
3. Perturb
4. Pendant
5. Pollution

- Ans
- 1. 3, 5, 2, 1, 4
  - 2. 4, 3, 5, 1, 2
  - 3. 4, 5, 3, 1, 2
  - 4. 3, 4, 2, 1, 5

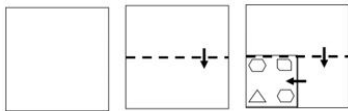
Question ID : 65497832932  
Status : Answered  
Chosen Option : 2

**Q.18** In a class of 72 students, the number of boys is twice the number of girls. Find the number of boys.

- Ans  1. 48  
 2. 36  
 3. 18  
 4. 24

Question ID : 65497832926  
 Status : Answered  
 Chosen Option : 1

**Q.19** The sequence of folding a piece of paper and the manner in which the folded paper has been cut is shown in the following figures. How would this paper look when unfolded?



Ans

- 1.
- 2.
- 3.
- 4.

Question ID : 65497832927  
 Status : Answered  
 Chosen Option : 1

**Q.20** Dheeraj said to Sandeep, "My mother is the only daughter of your mother." How is Dheeraj's mother related to Sandeep?

- Ans  1. Sister  
 2. Aunty  
 3. Mother  
 4. Grandmother

Question ID : 65497832916  
 Status : Answered  
 Chosen Option : 1



**Q.21** Read the given statements and conclusions carefully. Assuming that the information given in the statements is true, even if it appears to be at variance with commonly known facts, decide which of the given conclusions logically follow(s) from the statements.

**Statements:**

All boys are graduates.  
All graduates are married.

**Conclusions:**

I. All boys are married.  
II. All graduates are married.

- Ans**
- 1. Only conclusion I follows
  - 2. Only conclusion II follows
  - 3. Both the conclusions follow
  - 4. Either conclusion I or II follows

Question ID : 65497832924

Status : Answered

Chosen Option : 3

**Q.22** Select the option that is related to the third term in the same way as the second term is related to the first term.

**DRON : BPML :: HOST : ?**

- Ans**
- 1. MRQF
  - 2. FMQR
  - 3. MFRQ
  - 4. FMRQ

Question ID : 65497832913

Status : Answered

Chosen Option : 2

**Q.23** In a certain code language, ROM is written as  $\alpha^* @$  and HEIGHT is written as  $\epsilon \div \beta \odot \infty^*$ . How will TIGER be written in that language?

- Ans**
- 1.  $*\beta \odot + @$
  - 2.  $\odot + @ * \beta$
  - 3.  $x \div \beta \odot^*$
  - 4.  $*\beta \odot + \alpha$

Question ID : 65497832914

Status : Answered

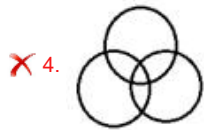
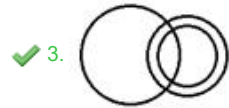
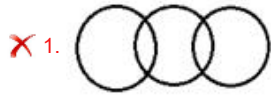
Chosen Option : 4



Q.24 Select the Venn diagram that best represents the relationship between the following classes.

Students, Players, Cricket players

Ans



Question ID : 65497832917

Status : Answered

Chosen Option : 4

Q.25 Select the box that can be formed by folding the given sheet along the lines.



Ans



Question ID : 65497832921

Status : Answered

Chosen Option : 3

**Q.1** Who among the following launched the India Climate Change Knowledge Portal in November 2020?

- Ans
- 1. Jagan Mohan Reddy
  - 2. Prakash Javadekar
  - 3. Nitish Kumar
  - 4. S Jaishankar

Question ID : 65497832943  
Status : Answered  
Chosen Option : 2

**Q.2** Real GDP is a measure of a country's total \_\_\_\_\_.

- Ans
- 1. income of the farmers
  - 2. economic output
  - 3. bank transactions
  - 4. wealth of the industrialists

Question ID : 65497832957  
Status : Answered  
Chosen Option : 2

**Q.3** Who among the following was the first ruler of the Gupta dynasty to adopt the grand title of Maharaj-adhiraja?

- Ans
- 1. Kumaragupta
  - 2. Ramagupta
  - 3. Chandragupta
  - 4. Skandagupta

Question ID : 65497832959  
Status : Answered  
Chosen Option : 3

**Q.4** Who among the following was the first Gupta ruler to assume the title of Maharajadhiraja?

- Ans
- 1. Samudragupta
  - 2. Chandragupta I
  - 3. Chandragupta II
  - 4. Ramgupta

Question ID : 65497832938  
Status : Answered  
Chosen Option : 2

**Q.5** The Citizenship Act of \_\_\_\_\_ deals with matters relating to acquisition, determination and termination of Indian citizenship after the commencement of the Constitution.

- Ans
- 1. 1955
  - 2. 1957
  - 3. 1951
  - 4. 1961

Question ID : 65497832941  
Status : Answered  
Chosen Option : 1

**Q.6 Which of the following is NOT a feature of 'Ocean currents'?**

- Ans
- 1. They flow in a definite direction.
  - 2. They are streams of water.
  - 3. They constantly flow on the ocean's surface.
  - 4. They do not have any definite direction.

Question ID : 65497832955  
Status : Answered  
Chosen Option : 3

**Q.7 The International Olympic Committee's new headquarters at \_\_\_\_\_ was awarded the European 2020 US Green Building Council (USGBC) Leadership Award.**

- Ans
- 1. Basel
  - 2. New York
  - 3. Paris
  - 4. Lausanne

Question ID : 65497832948  
Status : Answered  
Chosen Option : 1

**Q.8 'Janamsakhis', literally meaning birth stories, are writings which profess to be biographies of:**

- Ans
- 1. Kabir Das
  - 2. Narsinh Mehta
  - 3. Guru Nanak
  - 4. Guru Arjun Dev

Question ID : 65497832945  
Status : Not Answered  
Chosen Option : --

**Q.9 Which of the following substances is an alloy?**

- Ans
- 1. Zirconium
  - 2. Bronze
  - 3. Tungsten
  - 4. Platinum

Question ID : 65497832958  
Status : Answered  
Chosen Option : 2

**Q.10 Which of the following is NOT a measure of government deficit?**

- Ans
- 1. Fiscal deficit
  - 2. Revenue expenditure
  - 3. Primary deficit
  - 4. Revenue deficit

Question ID : 65497832949  
Status : Answered  
Chosen Option : 2

Q.11 The Nagzira Tiger Reserve is located in \_\_\_\_\_.

- Ans  1. Goa  
 2. Maharashtra  
 3. Sikkim  
 4. Rajasthan

Question ID : 65497832937  
Status : Answered  
Chosen Option : 1

Q.12 The first general election of Independent India was held in \_\_\_\_\_.

- Ans  1. 1961-62  
 2. 1951-52  
 3. 1967-68  
 4. 1957-58

Question ID : 65497832940  
Status : Answered  
Chosen Option : 2

Q.13 What is the boundary region from where there is a rapid decrease of temperature in the ocean called?

- Ans  1. Continental margin  
 2. Thermocline  
 3. Oceanic ridges  
 4. Hydroplane

Question ID : 65497832952  
Status : Answered  
Chosen Option : 2

Q.14 The 'kathaks' (of a dance form called Kathak), were originally a caste of \_\_\_\_\_ in temples of North India.

- Ans  1. bhajan singers  
 2. rhyme reciters  
 3. script writers  
 4. story tellers

Question ID : 65497832951  
Status : Answered  
Chosen Option : 2

Q.15 Who among the following was the first Home Minister of India?

- Ans  1. Gulzarilal Nanda  
 2. Sardar Vallabhbhai Patel  
 3. Gobind Ballabh Pant  
 4. Lal Bahadur Shastri

Question ID : 65497832953  
Status : Answered  
Chosen Option : 4

Q.16 Momentum of a body is defined to be the product of its:

- Ans
- 1. weight and velocity
  - 2. weight and speed
  - 3. mass and length
  - 4. mass and velocity

Question ID : 65497832946  
Status : Answered  
Chosen Option : 4

Q.17 Which of the following state governments in its budget for 2020-21 announced the 'Orunodoi Scheme'?

- Ans
- 1. Mizoram
  - 2. Assam
  - 3. Manipur
  - 4. Nagaland

Question ID : 65497832960  
Status : Not Answered  
Chosen Option : --

Q.18 Which of the following terms is NOT used in cricket?

- Ans
- 1. Square leg
  - 2. Mid leg
  - 3. Gully
  - 4. Fine leg

Question ID : 65497832956  
Status : Answered  
Chosen Option : 2

Q.19 Who among the following inaugurated GST Bhawan in Panchkula in November 2020?

- Ans
- 1. Rajiv Kumar
  - 2. Ajit Kumar
  - 3. Amit Shah
  - 4. Narendra Modi

Question ID : 65497832942  
Status : Answered  
Chosen Option : 1

Q.20 Which of the following sports has recently (in December 2020) been registered as an official Olympic sport, to make its debut at the 2024 Paris Games?

- Ans
- 1. Bowling
  - 2. Breakdancing
  - 3. Squash
  - 4. Karate

Question ID : 65497832954  
Status : Answered  
Chosen Option : 2

**Q.21** As of March 2021, what is the rate of premium on the sum assured in case of Kharif crops under 'Pradhan Mantri Fasal Bima Yojana'?

- Ans
- 1. 2.50%
  - 2. 1.50%
  - 3. 2.00%
  - 4. 1.00%

Question ID : 65497832936

Status : **Not Attempted and Marked For Review**

Chosen Option : --

**Q.22** Chlamydomonas is an example of:

- Ans
- 1. bacteria
  - 2. algae
  - 3. fungi
  - 4. viruses

Question ID : 65497832947

Status : **Not Answered**

Chosen Option : --

**Q.23** Which of the following teams won the trophy of Indian Premier League 2020?

- Ans
- 1. Delhi Capitals
  - 2. Sunrisers Hyderabad
  - 3. Mumbai Indians
  - 4. Royal Challengers Bangalore

Question ID : 65497832944

Status : **Answered**

Chosen Option : 3

**Q.24** Raziyya, the first female Muslim ruler, was the daughter of which Turkish ruler of India?

- Ans
- 1. Shams-ud-din Iltutmish
  - 2. Ghiyasuddin Balban
  - 3. Qutbuddin Aibak
  - 4. Muiz-ud-din Bahram

Question ID : 65497832950

Status : **Not Answered**

Chosen Option : --

**Q.25** In which of the following years was the Gadar Party formed in the US?

- Ans
- 1. 1915
  - 2. 1924
  - 3. 1913
  - 4. 1919

Question ID : 65497832939

Status : **Answered**

Chosen Option : 3

**Q.1** The cost of 6 flats was ₹60 lakh each. A builder sold one-third of the flats at 15% profit and one-sixth of the flats at 6% loss. If he incurred a net loss of 10% after selling the remaining flats, what was his loss percentage in the remaining flats?

- Ans**
- 1. 38%
  - 2. 18%
  - 3. 28%
  - 4. 30%

Question ID : 65497832971  
Status : Answered  
Chosen Option : 3

**Q.2** A shopkeeper has a certain number of apples, of which 15% are found to be rotten. He sells 90% of the remaining good apples and still has 34 good apples. How many apples did he originally have?

- Ans**
- 1. 450
  - 2. 300
  - 3. 420
  - 4. 400

Question ID : 65497832966  
Status : Answered  
Chosen Option : 4

**Q.3** The value of  $18 \div [92 \div 2 \text{ of } 8 + 3\frac{1}{4}]$  is:

- Ans**
- 1. 2
  - 2. 9
  - 3. 4
  - 4. 1

Question ID : 65497832963  
Status : Answered  
Chosen Option : 1

**Q.4** At what rate of simple interest will a sum of ₹4,500 amount to ₹5,310 after 3 years?

- Ans**
- 1. 7%
  - 2. 8%
  - 3. 6.5%
  - 4. 6%

Question ID : 65497832976  
Status : Answered  
Chosen Option : 4



**Q.5** Madhu sold a watch at a profit of 12%. Had she sold it for ₹28.80 more, she would have gained 18.4%. What was the cost price (in ₹) of the watch?

- Ans**
- 1. 540
  - 2. 450
  - 3. 500
  - 4. 480

Question ID : 65497832980  
Status : Answered  
Chosen Option : 2

**Q.6** The ratio of the curved surface area and volume of a closed cylinder is 4 : 5. If its total surface area is  $187 \text{ cm}^2$ , then its height (in cm) is (Take  $\pi = \frac{22}{7}$ ):

- Ans**
- 1. 10.7
  - 2. 9.4
  - 3. 12.5
  - 4. 11.9

Question ID : 65497832962  
Status : Answered  
Chosen Option : 1

**Q.7** A team of eight men entered for a shooting competition. The best marksman scored 82 points. If he had scored 90 points, the average scores for the team would have been 84. How many points altogether did the team score?

- Ans**
- 1. 646
  - 2. 564
  - 3. 546
  - 4. 664

Question ID : 65497832974  
Status : Answered  
Chosen Option : 4

**Q.8** What is the length (in cm) of the longest rod that can be fitted in a box of dimensions  $16 \text{ cm} \times 12 \text{ cm} \times 10 \text{ cm}$ ?

- Ans**
- 1.  $10\sqrt{5}$
  - 2. 20
  - 3.  $12\sqrt{5}$
  - 4.  $10\sqrt{3}$

Question ID : 65497832983  
Status : Answered  
Chosen Option : 1

**Q.9** A rectangular courtyard 1017 feet long and 1002 feet wide is to be paved exactly with square tiles, all of the same size. What is the side of such largest tiles which could be used for the purpose?

- Ans**
- 1. 5 feet
  - 2. 16 feet
  - 3. 10 feet
  - 4. 3 feet

Question ID : 65497832973  
Status : Answered  
Chosen Option : 4

**Q.10** A shopkeeper fixes the marked price of an article at 23% more than the cost price. He sold two-third of the articles at the marked price and the rest at a discount of 25% on the marked price. What is his total gain percentage?

- Ans**
- 1. 12.15%
  - 2. 12.25%
  - 3. 12.50%
  - 4. 12.75%

Question ID : 65497832979  
Status : Answered  
Chosen Option : 4

**Q.11** Manish sells an article by keeping the marked price of the article 44% higher than its cost price. Find his profit percentage or loss percentage if he gives 27.5% discount.

- Ans**
- 1. Profit 4.4%
  - 2. Loss 8%
  - 3. Loss 4.4%
  - 4. Profit 8%

Question ID : 65497832965  
Status : Answered  
Chosen Option : 1

**Q.12** The HCF of 108 and 198 is:

- Ans**
- 1. 34
  - 2. 98
  - 3. 12
  - 4. 18

Question ID : 65497832977  
Status : Answered  
Chosen Option : 4

**Q.13** 22 men can complete a piece of work in  $7\frac{1}{2}$  days. How many men will be required to complete the same work in  $5\frac{1}{2}$  days?

- Ans**
- 1. 28
  - 2. 25
  - 3. 32
  - 4. 30

Question ID : 65497832968  
Status : Answered  
Chosen Option : 4

**Q.14** Find the value of 9 of  $\{(4 \div 2) \times [2 - (4 \text{ of } 6 \div 2)] + (6 \times 1 \div 3)\} - 5$ .

- Ans**
- 1. -99
  - 2. -167
  - 3. -157
  - 4. -150

Question ID : 65497832984  
Status : Answered  
Chosen Option : 2

**Q.15** A train travels at an average speed of 40 km per hour for  $3\frac{1}{2}$  h and then travels at a speed of 60 km per hour for  $2\frac{1}{2}$  h. How far does the train travel in the entire 6 h?

- Ans**
- 1. 215 km
  - 2. 245 km
  - 3. 270 km
  - 4. 290 km

Question ID : 65497832985  
Status : Answered  
Chosen Option : 3

**Q.16** The average of the squares of two consecutive even natural numbers is 170. The average of the two numbers is:

- Ans**
- 1. 17
  - 2. 15
  - 3. 11
  - 4. 13

Question ID : 65497832964  
Status : Answered  
Chosen Option : 4

**Q.17** Find the compound interest on ₹8,100 at a rate of 20% per annum for 6 months compounded quarterly.

- Ans**
- 1. ₹830.25
  - 2. ₹800.75
  - 3. ₹780.60
  - 4. ₹950.50

Question ID : 65497832982  
Status : Answered  
Chosen Option : 1

**Q.18** When  $x$  is added to each of 6, 12, 18 and 28, then the numbers so obtained in this order are in a proportion. The value of  $(5x + 6) : (x - 1)$  is equal to:

- Ans**
- 1. 7 : 2
  - 2. 6 : 1
  - 3. 1 : 6
  - 4. 2 : 7

Question ID : 65497832961  
Status : Answered  
Chosen Option : 2

**Q.19** Vishnu left place A at 10 a.m. for place B, and Sudeep left place B at 2 p.m. for place A. The distance between the two places is 556 km. If Vishnu's speed is 42 km/h and Sudeep's speed is 55 km/h, then at what time will they meet each other?

- Ans**
- 1. 8 p.m.
  - 2. 5 p.m.
  - 3. 7 p.m.
  - 4. 6 p.m.

Question ID : 65497832970  
Status : Not Attempted and Marked For Review  
Chosen Option : --

**Q.20** Salaries of Ravi and Sumit are in the ratio 2 : 3. If the salary of each is increased by ₹5,000, the new ratio will become 5 : 7. What is Sumit's increased salary?

- Ans**
- 1. ₹40,000
  - 2. ₹30,000
  - 3. ₹25,000
  - 4. ₹35,000

Question ID : 65497832975  
Status : Answered  
Chosen Option : 1

**Q.21** Find the compound interest if a sum of ₹7,000 is invested for 1.5 years at 20% p.a. compounded half-yearly.

- Ans**
- 1. ₹3,337
  - 2. ₹2,137
  - 3. ₹2,017
  - 4. ₹2,317

Question ID : 65497832972  
Status : Answered  
Chosen Option : 4

Q.22 A is 15% of B, while B is 12% of C. If  $C = 1200$ , then  $A + B = ?$

- Ans
- 1. 165.6
  - 2. 216.8
  - 3. 128.6
  - 4. 174.8

Question ID : 65497832978  
Status : Answered  
Chosen Option : 1

Q.23 The profit obtained by selling an article for ₹1,850 is twice the profit obtained by selling the article for ₹1,600. The cost price of the article is:

- Ans
- 1. ₹1,300
  - 2. ₹1,350
  - 3. ₹1,250
  - 4. ₹1,200

Question ID : 65497832967  
Status : Answered  
Chosen Option : 2

Q.24 If  $3p = 4q$  and  $3q = 5r$ , then find the ratio  $p : r$ .

- Ans
- 1. 5 : 9
  - 2. 15 : 9
  - 3. 20 : 15
  - 4. 20 : 9

Question ID : 65497832981  
Status : Answered  
Chosen Option : 4

Q.25 A and B together can complete  $\frac{1}{5}$  of a work in  $4\frac{4}{5}$  days. A alone completes  $\frac{3}{4}$  of the work in 30 days. How long will B alone take to complete the whole work?

- Ans
- 1. 50 days
  - 2. 48 days
  - 3. 40 days
  - 4. 60 days

Question ID : 65497832969  
Status : Not Attempted and Marked For Review  
Chosen Option : --

Q.1 Select the most appropriate synonym of the given word.

Refuge

- Ans  1. Admit  
 2. Shelter  
 3. Entrance  
 4. Arrival

Question ID : 65497832989  
Status : Answered  
Chosen Option : 2

Q.2 Select the most appropriate option that can substitute the underlined segment in the given sentence. If there is no need to substitute it, select 'No substitution required'.

Wash and dry the raw mangoes, and use a fork to prick it all over.

- Ans  1. for prick it all over  
 2. No substitution required  
 3. for all over pricking them  
 4. to prick them all over

Question ID : 65497832987  
Status : Answered  
Chosen Option : 4

Q.3 Select the option that can be used as a one-word substitute for the given group of words.

Person who portrays bad character roles in cinema

- Ans  1. Villain  
 2. Altruist  
 3. Warrior  
 4. Sadist

Question ID : 65497832986  
Status : Answered  
Chosen Option : 1

Q.4 Select the most appropriate ANTONYM of the given word.

Reticent

- Ans  1. Hostile  
 2. Talkative  
 3. Controversial  
 4. Aggressive

Question ID : 65497832992  
Status : Not Answered  
Chosen Option : --

**Q.5** Select the most appropriate option that can substitute the underlined segment in the given sentence. If there is no need to substitute it, select 'No substitution required'.

My father said to me, "Where you have kept your books?"

- Ans
- 1. you are keeping
  - 2. No substitution required
  - 3. did you kept
  - 4. have you kept

Question ID : 65497832998  
Status : Answered  
Chosen Option : 4

**Q.6** Select the most appropriate meaning of the given idiom.

To take the bull by the horns

- Ans
- 1. To take revenge on enemies
  - 2. To be stubborn in every matter
  - 3. To try to accomplish things
  - 4. To deal with difficult situations courageously

Question ID : 65497832995  
Status : Answered  
Chosen Option : 4

**Q.7** Select the correctly spelt word.

- Ans
- 1. Absolutly
  - 2. Adaptation
  - 3. Abandan
  - 4. Acurate

Question ID : 65497832993  
Status : Answered  
Chosen Option : 2

**Q.8** Select the most appropriate option to fill in the blank.

He will \_\_\_\_\_ if they look after him carefully.

- Ans
- 1. pull off
  - 2. pull up
  - 3. pull through
  - 4. pull out

Question ID : 65497832994  
Status : Answered  
Chosen Option : 2



**Q.9** Select the most appropriate meaning of the given idiom.

**Down in the mouth**

- Ans**  1. To be depressed  
 2. To be happy  
 3. To feel hungry  
 4. To be angry

Question ID : 65497832996  
Status : Answered  
Chosen Option : 1

**Q.10** Select the most appropriate synonym of the given word.

**Accurate**

- Ans**  1. Exact  
 2. False  
 3. Active  
 4. General

Question ID : 65497832999  
Status : Answered  
Chosen Option : 1

**Q.11** Select the most appropriate option to fill in the blank.

The word 'ecology' refers to the pattern and \_\_\_\_\_ of relationships among plants, animals and people and their environment.

- Ans**  1. balance  
 2. outline  
 3. plan  
 4. policy

Question ID : 65497832990  
Status : Answered  
Chosen Option : 1

**Q.12** Select the most appropriate option to fill in the blank.

No changes can be made to the bond without the \_\_\_\_\_ of the partners.

- Ans**  1. sympathy  
 2. harmony  
 3. confession  
 4. consent

Question ID : 65497833001  
Status : Answered  
Chosen Option : 4

Q.13 The following sentence has been split into four segments. Identify the segment that contains a grammatical error.

Do you play / any other sports / beside of / cricket and football?

- Ans
- 1. Do you play
  - 2. beside of
  - 3. any other sports
  - 4. cricket and football

Question ID : 65497832997  
Status : Answered  
Chosen Option : 2

Q.14 Select the option that can be used as a one-word substitute for the given group of words.

Become less intense or widespread

- Ans
- 1. Ablaze
  - 2. Abode
  - 3. Abide
  - 4. Abate

Question ID : 65497833004  
Status : Answered  
Chosen Option : 3

Q.15 The following sentence has been divided into parts. One of them may contain an error. Select the part that contains the error from the given options. If you don't find any error, mark 'No error' as your answer.

The App has been so well-developed / that it anticipate / all the customers' needs.

- Ans
- 1. The App has been so well-developed
  - 2. all the customers' needs
  - 3. that it anticipate
  - 4. No error

Question ID : 65497833002  
Status : Answered  
Chosen Option : 2

Q.16 Select the INCORRECTLY spelt word.

- Ans
- 1. Accommodate
  - 2. Quarantine
  - 3. Unique
  - 4. Intregue

Question ID : 65497833005  
Status : Answered  
Chosen Option : 4

Q.17 The following sentence has been split into four segments. Identify the segment that contains a grammatical error.

Our team leader / told us to be at the work / by 9 a.m. / the next morning.

Ans  1. told us to be at the work

2. the next morning

3. by 9 a.m.

4. Our team leader

Question ID : 65497832988

Status : Answered

Chosen Option : 1

Q.18 Select the option that can be used as a one-word substitute for the given group of words.

A person who loves his/her country and, if necessary, will fight for it

Ans  1. Patron

2. Patriot

3. Patriarch

4. Expatriate

Question ID : 65497833000

Status : Answered

Chosen Option : 2

Q.19 Select the most appropriate ANTONYM of the given word.

AMPLE

Ans  1. Sufficient

2. Enough

3. Liberal

4. Meagre

Question ID : 65497833003

Status : Answered

Chosen Option : 4

Q.20 Select the most appropriate option that can substitute the underlined segment in the given sentence. If there is no need to substitute it, select 'No substitution required'.

Naveena won a scholarship to further studies in medicine and decided to go abroad.

Ans  1. No substitution required

2. in furthering studies with medicine

3. for further studies in medicine

4. for further study on medicine

Question ID : 65497832991

Status : Answered

Chosen Option : 3

**Comprehension:**

In the following passage, some words have been deleted. Read the passage carefully and select the most appropriate option to fill in each blank.

(1)\_\_\_\_\_ my thirteenth birthday, my mother made chicken pizza at home. That was the (2)\_\_\_\_\_ pizza I have ever eaten. She had made (3)\_\_\_\_\_ quantity for all my friends and everyone had a plateful. After the party got over, she (4)\_\_\_\_\_ me by gifting a beautiful pullover. The (5)\_\_\_\_\_ visit of my grandmother made my day.

**SubQuestion No : 21**

**Q.21** Select the most appropriate option to fill in blank number 1.

- Ans  1. At  
 2. On  
 3. In  
 4. From

Question ID : 65497833007  
Status : Answered  
Chosen Option : 2

**Comprehension:**

In the following passage, some words have been deleted. Read the passage carefully and select the most appropriate option to fill in each blank.

(1)\_\_\_\_\_ my thirteenth birthday, my mother made chicken pizza at home. That was the (2)\_\_\_\_\_ pizza I have ever eaten. She had made (3)\_\_\_\_\_ quantity for all my friends and everyone had a plateful. After the party got over, she (4)\_\_\_\_\_ me by gifting a beautiful pullover. The (5)\_\_\_\_\_ visit of my grandmother made my day.

**SubQuestion No : 22**

**Q.22** Select the most appropriate option to fill in blank number 2.

- Ans  1. good  
 2. better  
 3. best  
 4. very better

Question ID : 65497833008  
Status : Answered  
Chosen Option : 3

**Comprehension:**

In the following passage, some words have been deleted. Read the passage carefully and select the most appropriate option to fill in each blank.

(1)\_\_\_\_\_ my thirteenth birthday, my mother made chicken pizza at home. That was the (2)\_\_\_\_\_ pizza I have ever eaten. She had made (3)\_\_\_\_\_ quantity for all my friends and everyone had a plateful. After the party got over, she (4)\_\_\_\_\_ me by gifting a beautiful pullover. The (5)\_\_\_\_\_ visit of my grandmother made my day.

**SubQuestion No : 23**

**Q.23** Select the most appropriate option to fill in blank number 3.

- Ans  1. insufficient  
 2. sufficient  
 3. little  
 4. inadequate

Question ID : 65497833009  
Status : Answered  
Chosen Option : 2

**Comprehension:**

In the following passage, some words have been deleted. Read the passage carefully and select the most appropriate option to fill in each blank.

(1)\_\_\_\_\_ my thirteenth birthday, my mother made chicken pizza at home. That was the  
(2)\_\_\_\_\_ pizza I have ever eaten. She had made (3)\_\_\_\_\_ quantity for all my friends and everyone had a plateful. After the party got over, she (4)\_\_\_\_\_ me by gifting a beautiful pullover. The (5)\_\_\_\_\_ visit of my grandmother made my day.

**SubQuestion No : 24**

**Q.24** Select the most appropriate option to fill in blank number 4.

- Ans  1. surprised  
 2. tormented  
 3. blasted  
 4. drove

Question ID : 65497833010  
Status : Answered  
Chosen Option : 1

**Comprehension:**

In the following passage, some words have been deleted. Read the passage carefully and select the most appropriate option to fill in each blank.

(1)\_\_\_\_\_ my thirteenth birthday, my mother made chicken pizza at home. That was the  
(2)\_\_\_\_\_ pizza I have ever eaten. She had made (3)\_\_\_\_\_ quantity for all my friends and everyone had a plateful. After the party got over, she (4)\_\_\_\_\_ me by gifting a beautiful pullover. The (5)\_\_\_\_\_ visit of my grandmother made my day.

**SubQuestion No : 25**

**Q.25** Select the most appropriate option to fill in blank number 5.

- Ans  1. undesirable  
 2. uneventful  
 3. untoward  
 4. unexpected

Question ID : 65497833011  
Status : Answered  
Chosen Option : 4

Section : Part D Hindi

**Q.1** दिए गए वाक्यांश के लिए एक शब्द चुनिए।

जो पहले हो चुका हो

- Ans  1. अपूर्व  
 2. भूतपूर्व  
 3. पूर्वी  
 4. पूर्वकल्पित

Question ID : 65497833025  
Status : Not Answered  
Chosen Option : --

Q.2 दिये गये वाक्यांश के लिए एक शब्द दीजिये।

जिसके समान कोई दूसरा न हो

- Ans  1. अद्वितीय  
 2. अग्रगण्य  
 3. अनादि  
 4. अनत

Question ID : 65497833018  
Status : Not Answered  
Chosen Option : --

Q.3 सही वर्तनी वाले शब्द का चयन करें।

- Ans  1. सन्न्यासी  
 2. सन्यासी  
 3. सन्यासी  
 4. सनयासी

Question ID : 65497833022  
Status : Not Answered  
Chosen Option : --

Q.4 दिए गए वाक्य का वह भाग ज्ञात करें जिसमें कोई त्रुटि है। यदि कोई त्रुटि नहीं है, तो 'कोई त्रुटि नहीं है' चुनें।

पाँच नगरो का नाम बताईये, जहाँ जनसंख्या घनत्व अधिक है।

- Ans  1. अधिक है।  
 2. जहाँ जनसंख्या घनत्व  
 3. पाँच नगरो का नाम बताईये  
 4. कोई त्रुटि नहीं है।

Question ID : 65497833015  
Status : Not Answered  
Chosen Option : --

Q.5 दिए गये वाक्यांश के लिए एक शब्द दीजिये।

जिसे कभी बुढ़ापा न आए

- Ans  1. अमृत्य  
 2. अमर  
 3. अजर  
 4. अजेय

Question ID : 65497833013  
Status : Not Answered  
Chosen Option : --

Q.6 दिये गये वाक्य के किस भाग में त्रुटि है?

मैं उसकी चातुर्यता से दग रह गया।

- Ans
- 1. रह गया।
  - 2. चातुर्यता
  - 3. मैं उसकी
  - 4. से दग

Question ID : 65497833027  
Status : Not Answered  
Chosen Option : --

Q.7 रिक्त स्थान को भरने के लिए सबसे उपयुक्त विकल्प का चयन करें।

लता मगेशकर ने सैकड़ों \_\_\_\_\_ गाए हैं।

- Ans
- 1. सगीत
  - 2. नृत्य
  - 3. गीत
  - 4. कविता

Question ID : 65497833029  
Status : Not Answered  
Chosen Option : --

Q.8 दिये गये वाक्य में रेखांकित अश को प्रतिस्थापित करने के लिए सबसे उपयुक्त विकल्प का चयन करें।

व्यायाम से शारीरिक प्रगति होती है।

- Ans
- 1. अवनति
  - 2. सुदरता
  - 3. विकास
  - 4. उन्नति

Question ID : 65497833026  
Status : Not Answered  
Chosen Option : --

Q.9 रिक्त स्थान भरने के लिए सबसे उपयुक्त शब्द का चयन करें।

सभा \_\_\_\_\_ हो गई।

- Ans
- 1. विसर्जन
  - 2. शुरुआती
  - 3. समाप्ति
  - 4. विसर्जित

Question ID : 65497833012  
Status : Not Answered  
Chosen Option : --



Q.10 दिए गए वाक्य में रेखांकित खंड को प्रतिस्थापित करने के लिए सबसे उपयुक्त विकल्प का चयन करें। यदि इसे प्रतिस्थापित करने की आवश्यकता नहीं है, तो विकल्प 'किसी बदलाव की आवश्यकता नहीं है' का चयन करें।

उस समय यमुना में जल तो अधिक न थी और मगरमच्छ भी बहुत थे।

- Ans
- 1. किसी बदलाव की आवश्यकता नहीं है।
  - 2. पानी तो अधिक न थी
  - 3. जल भी अधिक न थे
  - 4. जल भी अधिक न था

Question ID : 65497833016  
Status : Not Answered  
Chosen Option : --

Q.11 सही वर्तनी वाले शब्द का चयन करें।

- Ans
- 1. राजनैतीक
  - 2. राजनैतिक
  - 3. राजनीतिक
  - 4. राजनितीक

Question ID : 65497833021  
Status : Not Answered  
Chosen Option : --

Q.12 दिए गए वाक्य का वह भाग ज्ञात करें जिसमें कोई त्रुटि है। यदि कोई त्रुटि नहीं है, तो 'कोई त्रुटि नहीं है' चुनें।

इस परिसर में (1)/ अनाधिकार प्रवेश (2)/ वर्जित है। (3)/ कोई त्रुटि नहीं है (4)

- Ans
- 1. 2
  - 2. 1
  - 3. 4
  - 4. 3

Question ID : 65497833019  
Status : Not Answered  
Chosen Option : --

Q.13 दिए गए शब्द का विलोम चुनें।

लघु

- Ans
- 1. दाता
  - 2. महान
  - 3. सौम्य
  - 4. गुरु

Question ID : 65497833017  
Status : Not Answered  
Chosen Option : --

Q.14 रिक्त स्थान को भरने के लिए सबसे उपयुक्त शब्द का चयन करें।

आज \_\_\_\_\_ बाजार जाना है।

- Ans
- 1. मुझे
  - 2. मैंने
  - 3. मेरे को
  - 4. मुझको

Question ID : 65497833023  
Status : Not Answered  
Chosen Option : --

Q.15 दिए गए वाक्य में रेखांकित खंड को प्रतिस्थापित करने के लिए सबसे उपयुक्त विकल्प का चयन करें।  
यदि इसे प्रतिस्थापित करने की आवश्यकता नहीं है, तो विकल्प 'किसी बदलाव की आवश्यकता नहीं है'  
का चयन करें।

वह मिलनसार था, इसलिए उन्होंने कई मित्र बना लिए।

- Ans
- 1. इसलिए उससे कई मित्र बना लिए।
  - 2. किसी बदलाव की आवश्यकता नहीं है।
  - 3. इसलिए उसने कई मित्र बना लिए।
  - 4. इसलिए उनके कई मित्र बना लिए।

Question ID : 65497833014  
Status : Not Answered  
Chosen Option : --

Q.16 'पत्थर की लकीर होना' मुहावरे का सही अर्थ है-

- Ans
- 1. मूर्ख होना
  - 2. कठोर होना
  - 3. बात पक्की होना
  - 4. नकल करना

Question ID : 65497833031  
Status : Not Answered  
Chosen Option : --

Q.17 'भार्या' का पर्यायवाची है-

- Ans
- 1. दुहिता
  - 2. पत्नी
  - 3. बहन
  - 4. पुत्री

Question ID : 65497833028  
Status : Not Answered  
Chosen Option : --

Q.18 'परुष' का विलोम शब्द होगा-

- Ans
- 1. कोमल
  - 2. कठोर
  - 3. कर्कश
  - 4. आकर्षक

Question ID : 65497833030  
Status : Not Answered  
Chosen Option : --

Q.19 दिए गए चार विकल्पों में से, उस विकल्प का चयन करें जो नीचे दिए मुहावरे का अर्थ व्यक्त करता है।

भाड़ झोकना

- Ans  1. व्यर्थ समय खोना  
 2. सहायता करना  
 3. आग जलाना  
 4. काम करना

Question ID : 65497833024  
Status : Not Answered  
Chosen Option : --

Q.20 दिए गए शब्द के समानार्थी शब्द का चयन करें।

लहर

- Ans  1. धारा  
 2. उर्मिल  
 3. ऊर्मि  
 4. बहाव

Question ID : 65497833020  
Status : Not Answered  
Chosen Option : --

**Comprehension:**

दिए गए अनुच्छेद में कुछ शब्द हटा दिए गए हैं। दिए गए विकल्पों की सहायता से रिक्त स्थान भरें। प्रत्येक सख्या के लिए सबसे उपयुक्त विकल्प का चयन करें।

उन दिनों हम रेलवे क्वार्टरों में रहते थे। मैं अपने (1) \_\_\_\_\_ केशव के साथ घर की ओर चला जा रहा था। एकाएक तेज (2) \_\_\_\_\_ चलने लगी। अचानक (3) \_\_\_\_\_ करता हुआ एक बहुत (4) \_\_\_\_\_ शीशम वृक्ष गिर पड़ा। केशव (5) \_\_\_\_\_ बचा।

**SubQuestion No : 21**

Q.21 गद्यांश के रिक्त स्थान (1) के लिए सर्वाधिक उपयुक्त शब्द होगा-

- Ans  1. दुश्मन  
 2. मित्र  
 3. व्यक्ति  
 4. आदमी

Question ID : 65497833033  
Status : Not Answered  
Chosen Option : --

**Comprehension:**

दिए गए अनुच्छेद में कुछ शब्द हटा दिए गए हैं। दिए गए विकल्पों की सहायता से रिक्त स्थान भरें। प्रत्येक सख्या के लिए सबसे उपयुक्त विकल्प का चयन करें।

उन दिनों हम रेलवे क्रांटरो में रहते थे। मैं अपने (1) \_\_\_\_\_ केशव के साथ घर की ओर चला जा रहा था। एकाएक तेज (2) \_\_\_\_\_ चलने लगी। अचानक (3) \_\_\_\_\_ करता हुआ एक बहुत (4) \_\_\_\_\_ शीशम वृक्ष गिर पड़ा। केशव (5) \_\_\_\_\_ बचा।

**SubQuestion No : 22**

Q.22 गद्यांश के रिक्त स्थान (2) के लिए सर्वाधिक उपयुक्त शब्द होगा-

- Ans
- 1. अधड़
  - 2. बवडर
  - 3. तूफ़ान
  - 4. हवा

Question ID : 65497833034

Status : Not Answered

Chosen Option : --

**Comprehension:**

दिए गए अनुच्छेद में कुछ शब्द हटा दिए गए हैं। दिए गए विकल्पों की सहायता से रिक्त स्थान भरें। प्रत्येक सख्या के लिए सबसे उपयुक्त विकल्प का चयन करें।

उन दिनों हम रेलवे क्रांटरो में रहते थे। मैं अपने (1) \_\_\_\_\_ केशव के साथ घर की ओर चला जा रहा था। एकाएक तेज (2) \_\_\_\_\_ चलने लगी। अचानक (3) \_\_\_\_\_ करता हुआ एक बहुत (4) \_\_\_\_\_ शीशम वृक्ष गिर पड़ा। केशव (5) \_\_\_\_\_ बचा।

**SubQuestion No : 23**

Q.23 गद्यांश के रिक्त स्थान (3) के लिए सर्वाधिक उपयुक्त शब्द होगा-

- Ans
- 1. फटफट- ताड़
  - 2. छनछन- खटखट
  - 3. सनसन-फट
  - 4. कड़कड़-धड़ाम

Question ID : 65497833035

Status : Not Answered

Chosen Option : --

**Comprehension:**

दिए गए अनुच्छेद में कुछ शब्द हटा दिए गए हैं। दिए गए विकल्पों की सहायता से रिक्त स्थान भरें। प्रत्येक सख्या के लिए सबसे उपयुक्त विकल्प का चयन करें।

उन दिनों हम रेलवे क्रांटरो में रहते थे। मैं अपने (1) \_\_\_\_\_ केशव के साथ घर की ओर चला जा रहा था। एकाएक तेज (2) \_\_\_\_\_ चलने लगी। अचानक (3) \_\_\_\_\_ करता हुआ एक बहुत (4) \_\_\_\_\_ शीशम वृक्ष गिर पड़ा। केशव (5) \_\_\_\_\_ बचा।

**SubQuestion No : 24**

Q.24 गद्यांश के रिक्त स्थान (4) के लिए सर्वाधिक उपयुक्त शब्द होगा-

- Ans
- 1. विशाल
  - 2. गीला
  - 3. नन्हा
  - 4. पतला

Question ID : 65497833036

Status : Not Answered

Chosen Option : --

**Comprehension:**

दिए गए अनुच्छेद में कुछ शब्द हटा दिए गए हैं। दिए गए विकल्पों की सहायता से रिक्त स्थान भरें। प्रत्येक सख्या के लिए सबसे उपयुक्त विकल्प का चयन करें।

उन दिनों हम रेलवे काटरो में रहते थे। मैं अपने (1) \_\_\_\_\_ केशव के साथ घर की ओर चला जा रहा था। एकाएक तेज (2) \_\_\_\_\_ चलने लगी। अचानक (3) \_\_\_\_\_ करता हुआ एक बहुत (4) \_\_\_\_\_ शीशम वृक्ष गिर पड़ा। केशव (5) \_\_\_\_\_ बचा।

**SubQuestion No : 25**

**Q.25** गद्यांश के रिक्त स्थान (5) के लिए सर्वाधिक उपयुक्त शब्द होगा-

- Ans**
- 1. थोड़ा-थोड़ा
  - 2. बाल-बाल
  - 3. बूँद भर
  - 4. हाथ-हाथ

Question ID : 65497833037

Status : Not Answered

Chosen Option : --

PRACTICE

MOCK