

PRACTICE **MOCK**

GET IT ON
Google Play



CRACK SSC EXAMS

WITH QUALITY MOCK TEST SERIES

SSC GD
CONSTABLE

~~199/-~~
159/-

PM SSC
PRO
6 MONTHS

249/-

PM SSC
PRO
12 MONTHS

399/-

PM PREMIUM
PACKAGE
Banking, SSC & Others

999/-

Features

- * Free PDFs
- * Test Series
- * Live Mocks
- * Free Classes
- * Free Quizzes

SSC GD Constable Free
Crash Course 2022

Previous Year Paper

DOWNLOAD **FREE** PDF

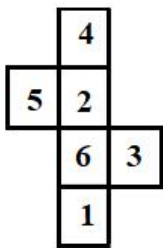




Exam Date	26/11/2021
Exam Time :	4:00 PM - 5:30 PM
Subject	Constable GD 2021

Section : Part A General Intelligence and Reasoning

Q.1 Select the dice that can be formed by folding the given sheet along the lines.



A



B



C



D

- Ans
- 1. Only A and C
 - 2. Only A, C and D
 - 3. Only A
 - 4. Only A and D

Question ID : 65497828605

Status : Answered

Chosen Option : 4

Q.2 In a certain code language, 'INSPIRE' is written as 'JPTTJZF'. How will 'FORGIVE' be written in that language?

- Ans
- 1. GQTKJEF
 - 2. GQRKIDF
 - 3. GQSKJDF
 - 4. GQSLIDF

Question ID : 65497828616

Status : Answered

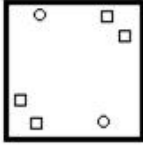
Chosen Option : 3

Q.3 The sequence of folding a piece of paper and the manner in which the folded paper has been cut is shown in the following figures. How would this paper look when unfolded?

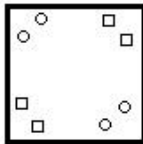


Ans

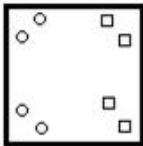
1.



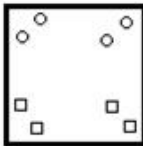
2.



3.



4.



Question ID : 65497828597

Status : Answered

Chosen Option : 2

Q.4 Select the number from among the given options that can replace the question mark (?) in the following series.

21, 32, 54, ?, 131

Ans 1. 72

2. 95

3. 66

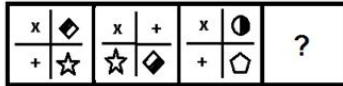
4. 87

Question ID : 65497828613

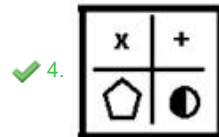
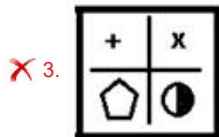
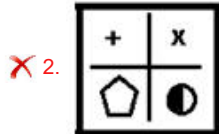
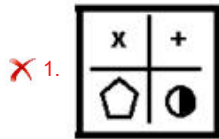
Status : Answered

Chosen Option : 4

Q.5 Select the figure from among the given options that can replace the question mark (?) in the following series.



Ans



Question ID : 65497828614

Status : Answered

Chosen Option : 4

Q.6 Select the option that is related to the third word in the same way as the second word is related to the first word.

Speed : Speedometer :: Air pressure : ?

Ans ✗ 1. Variometer

✗ 2. Altimeter

✗ 3. Hypsometer

✓ 4. Barometer

Question ID : 65497828608

Status : Answered

Chosen Option : 4

Q.7 Six friends, P, Q, R, S, T and U are sitting in two rows, three in each. S is not at the end of any row. T is a neighbour of R. R and U are sitting diagonally opposite to each other. P is second to the left of U. Who among the following three friends are in the same row?

Ans ✗ 1. TQU and PRS

✓ 2. PSU and RTQ

✗ 3. STU and PRQ

✗ 4. PTQ and RSU

Question ID : 65497828609

Status : Answered

Chosen Option : 2

Q.8 Select the letter-cluster from among the given options that can replace the question mark (?) in the following series.

KMQW, HJNT, CEIO, ?

- Ans
- 1. FINT
 - 2. ACGM
 - 3. OQSY
 - 4. IMST

Question ID : 65497828607
Status : Answered
Chosen Option : 2





Q.9 Arunima told Sahil, "Your brother-in-law's only sister's son is my grandson." How is Sahil related to Arunima?

- Ans
- 1. Son-in-law
 - 2. Uncle
 - 3. Son
 - 4. Father-in-law

Question ID : 65497828617
Status : Answered
Chosen Option : 3

Q.10 Select the Venn diagram that best represents the relationship between the following classes.

Grain, Beetroot, Kiwi

- Ans
- 1. 
 - 2. 
 - 3. 
 - 4. 

Question ID : 65497828610
Status : Answered
Chosen Option : 3

Q.11 In a certain code language, 'RAT' is coded as '39' and 'BEAR' is coded as '26'. How will 'SNAKE' be coded in that language?

- Ans
- 1. 50
 - 2. 54
 - 3. 52
 - 4. 48

Question ID : 65497828599
Status : Answered
Chosen Option : 1

Q.12 Select the option in which the numbers are related in the same way as are the numbers in the given set.

(7, 308, 11)

- Ans 1. (16, 239, 6)
 2. (12, 324, 9)
 3. (9, 160, 8)
 4. (8, 164, 5)

Question ID : 65497828595
Status : Answered
Chosen Option : 2

Q.13 Select the option that is related to the third number in the same way as the second number is related to the first number.

8 : 104 :: 16 : ?

- Ans 1. 300
 2. 335
 3. 336
 4. 320

Question ID : 65497828603
Status : Not Answered
Chosen Option : --

Q.14 Select the option that is related to the third letter-cluster in the same way as the second letter-cluster is related to the first letter-cluster.

HKN : KOS :: MPS : ?

- Ans 1. TPX
 2. PTW
 3. TPW
 4. PTX

Question ID : 65497828615
Status : Answered
Chosen Option : 4

Q.15 In a certain code language, 'HORNS' is written as 'SRONH' and 'CRUDE' is written as 'UREDC'. How will 'FACTOR' be written in that language?

- Ans 1. TSOCAE
 2. TROFCA
 3. ACFOTR
 4. TROACF

Question ID : 65497828593
Status : Answered
Chosen Option : 4

Q.16 In an organisation consisting of 214 employees, 120 have participated in Clay Modelling and 130 have participated in Poster Making, 36 employees have participated in both Clay Modelling and Poster Making. If each employee has participated in at least one of the two activities, how many employees participated in Poster Making only?

- Ans
- 1. 80
 - 2. 90
 - 3. 84
 - 4. 94

Question ID : 65497828596
Status : Answered
Chosen Option : 4

Q.17 Select the number from among the given options that can replace the question mark (?) in the following series.

31, 37, 41, 43, ?

- Ans
- 1. 51
 - 2. 47
 - 3. 45
 - 4. 49

Question ID : 65497828600
Status : Answered
Chosen Option : 4

Q.18 Select the correct option that indicates the arrangement of the given words in the order in which they appear in an English dictionary.

1. Program
2. Problem
3. Proposal
4. Profound
5. Property

- Ans
- 1. 2, 1, 4, 5, 3
 - 2. 2, 4, 1, 5, 3
 - 3. 4, 2, 1, 3, 5
 - 4. 3, 2, 4, 5, 1

Question ID : 65497828611
Status : Answered
Chosen Option : 2

Q.19 Four letter-clusters have been given, out of which three are alike in some manner and one is different. Select the letter-cluster that is different.

- Ans
- 1. HQY
 - 2. HQZ
 - 3. BKT
 - 4. DMV

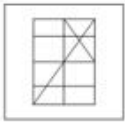
Question ID : 65497828598
Status : Answered
Chosen Option : 1

Q.20 Select the option in which the given figure is embedded (rotation is NOT allowed).



Ans

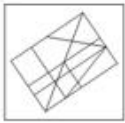
1.



2.



3.



4.



Question ID : 65497828606

Status : Answered

Chosen Option : 2

Q.21 If 'A' denotes 'addition', 'B' denotes 'multiplication', 'C' denotes 'subtraction', and 'D' denotes 'division', then what will be the value of the following expression?

90 D (2 B 5) A 4 B (12 A 10) C 4 B (17 C 10)

Ans 1. 67

2. 61

3. 65

4. 69

Question ID : 65497828604

Status : Answered

Chosen Option : 4

Q.22 Five friends, A, B, C, D and E, are sitting in a straight line. A and B are adjacent to each other. B is between A and C. A is 3rd from the left of D. D is 2nd from the right. Who is sitting 3rd from the left?

Ans 1. D

2. A

3. C

4. E

Question ID : 65497828602

Status : Answered

Chosen Option : 3

Q.23 Read the given statements and conclusions carefully. Assuming that the information given in the statements is true, even if it appears to be at variance with commonly known facts, decide which of the given conclusions logically follow(s) from the statements.

Statements:

1. No girl is a musician.
2. No musician is a teacher.
3. All stars are musicians.

Conclusions:

- I. No star is a girl.
- II. No star is a teacher.

- Ans**
- 1. Both the conclusions follow
 - 2. Only conclusion II follows
 - 3. Only conclusion I follows
 - 4. None of the conclusions follow

Question ID : 65497828594

Status : Answered

Chosen Option : 1

Q.24 Select the combination of letters that when sequentially placed in the blanks of the given series will complete the series.

Z _ _ U M _ A F _ M _ A _ _ M

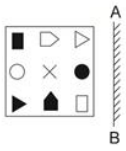
- Ans**
- 1. FDPZMUF
 - 2. AFZUFU
 - 3. DZFUMZA
 - 4. UADZMFZ

Question ID : 65497828612

Status : Answered


Chosen Option : 2

Q.25 Select the correct mirror image of the given figure when the mirror is placed at 'AB' as shown.




Ans


✗ 1.



✗ 2.



✓ 3.



✗ 4.



Question ID : 65497828601

Status : Answered

Chosen Option : 3

Section : Part B General Knowledge and General Awareness

Q.1 Curd and vinegar taste sour because they contain _____.

Ans ✗ 1. chemicals

✓ 2. acids

✗ 3. proteins

✗ 4. yeast

Question ID : 65497828633

Status : Answered

Chosen Option : 2

Q.2 Who among the following is credited with being the 'Pioneer of Rocket Technology' in India?

Ans ✗ 1. Lord Cornwallis

✗ 2. Babar

✗ 3. Akbar II

✓ 4. Tipu Sultan

Question ID : 65497828638

Status : Answered

Chosen Option : 1

Q.3 Which of the following is the largest west flowing river in Peninsular India?

- Ans
- 1. Krishna
 - 2. Kaveri
 - 3. Narmada
 - 4. Godavari

Question ID : 65497828618
Status : Not Answered
Chosen Option : --

Q.4 Who inaugurated 'Destination North East 2020', to showcase the region's culture, tourism and heritage?

- Ans
- 1. Union Minister for Tourism and Culture, Prahlad Singh Patel
 - 2. Union Minister for Tourism, Dr Jitendra Singh
 - 3. The Prime Minister, Narendra Modi
 - 4. Union Home Minister, Amit Shah

Question ID : 65497828635
Status : Not Answered
Chosen Option : --

Q.5 Chhath Puja, the famous traditional festival of India is dedicated to which of the following Gods?

- Ans
- 1. Moon
 - 2. Lord Brahma
 - 3. Sun
 - 4. Lord Shiva

Question ID : 65497828621
Status : Answered
Chosen Option : 3

Q.6 Who among the following won the Nitto Men's ATP Tour Finals in 2020?

- Ans
- 1. Dominic Thiem
 - 2. Novak Djokovic
 - 3. Daniil Medvedev
 - 4. Andrey Rublev

Question ID : 65497828626
Status : Not Answered
Chosen Option : --

Q.7 Which Amendment enabled 27% reservation for OBC in government and private educational institutes in 2006?

- Ans
- 1. 93rd
 - 2. 77th
 - 3. 86th
 - 4. 92nd

Question ID : 65497828631
Status : Answered
Chosen Option : 4

Q.8 In which state was the Forest Martyrs' Memorial inaugurated in November 2020?

- Ans
- 1. Karnataka
 - 2. Tamil Nadu
 - 3. Maharashtra
 - 4. Andhra Pradesh

Question ID : 65497828642
Status : Not Answered
Chosen Option : --

Q.9 Who among the following Indian actors has been appointed as the state icon of Punjab by the Election Commission of India?

- Ans
- 1. Amitabh Bachchan
 - 2. Sonu Sood
 - 3. Salman Khan
 - 4. Akshay Kumar

Question ID : 65497828624
Status : Answered
Chosen Option : 2

Q.10 Which of the following states has the highest life expectancy at birth?

- Ans
- 1. Kerala
 - 2. Goa
 - 3. Haryana
 - 4. Tamil Nadu

Question ID : 65497828619
Status : Answered
Chosen Option : 1

Q.11 When was the All India Tennis Association (AITA) established in India?

- Ans
- 1. 1912
 - 2. 1934
 - 3. 1956
 - 4. 1920

Question ID : 65497828625
Status : Answered
Chosen Option : 2

Q.12 Who is the author of the book 'Lessons Life Taught Me, Unknowingly'?

- Ans
- 1. Shilpa Shetty
 - 2. Anupam Kher
 - 3. Twinkle Khanna
 - 4. Javed Akhtar

Question ID : 65497828630
Status : Answered
Chosen Option : 2

Q.13 GDP can be expressed in two different ways, nominal GDP and _____.

- Ans
- 1. domestic GDP
 - 2. real GDP
 - 3. symbolic GDP
 - 4. calculated GDP

Question ID : 65497828636
Status : Answered
Chosen Option : 2

Q.14 _____, built by the Mughal Emperor Shah Jahan in the 17th century, was the main residence of the Mughal Emperors for nearly 200 years.

- Ans
- 1. Tughlaqabad Fort, Delhi
 - 2. Siri Fort, Delhi
 - 3. Red Fort, Delhi
 - 4. Salimgarh Fort, Delhi

Question ID : 65497828634
Status : Answered
Chosen Option : 3

Q.15 Queen Victoria's Proclamation declared that thereafter India would be governed by and in the name of the British Monarch through a Secretary of State on:

- Ans
- 1. 27 October, 1858
 - 2. 1 November, 1858
 - 3. 12 August, 1858
 - 4. 16 September, 1860

Question ID : 65497828620
Status : Answered
Chosen Option : 1

Q.16 Kabini is an important tributary of the river:

- Ans
- 1. Cauvery
 - 2. Krishna
 - 3. Mahi
 - 4. Godavari

Question ID : 65497828637
Status : Answered
Chosen Option : 3

Q.17 In which part of Article 44 of the Constitution of India is the provision for uniform civil code for the citizens contained?

- Ans
- 1. Part III
 - 2. Part VI
 - 3. Part IV
 - 4. Part II

Question ID : 65497828640
Status : Answered
Chosen Option : 3

Q.18 Who was appointed as the first Chairperson of the Reserve Bank Innovation Hub in November 2020?

- Ans 1. Senapathy (Kris) Gopalakrishnan
 2. TN Manoharan
 3. Rajiv Kumar
 4. Narayan Murthy

Question ID : 65497828622
Status : Not Answered
Chosen Option : --

Q.19 Which of the following is NOT a cold-blooded animal?

- Ans 1. Rabbit
 2. Shark
 3. Crocodile
 4. Frog

Question ID : 65497828628
Status : Answered
Chosen Option : 1

Q.20 The smallest and longest bones in the human body are _____ and _____, respectively.

- Ans 1. stapes, fibula
 2. tibia, femur
 3. stapes, femur
 4. nails, fibula

Question ID : 65497828629
Status : Answered
Chosen Option : 3

Q.21 Who among the following cricketers was the winner of 'ICC ODI Cricketer of the Year Award 2020'?

- Ans 1. Mahendra Singh Dhoni
 2. Virat Kohli
 3. Jasprit Bumrah
 4. Rohit Sharma

Question ID : 65497828641
Status : Answered
Chosen Option : 2

Q.22 Which of the following lakes of India has NOT been added to the Ramsar Sites?

- Ans 1. Chil ka Lake
 2. Keetham Lake
 3. Loktak Lake
 4. Dal Lake

Question ID : 65497828623
Status : Answered
Chosen Option : 2

Q.23 The Buddhist Vihara at Sanchi is also known as 'Great Stupa'. It is one of the most famous Buddhist monuments in India, located at Sanchi town in _____ district.

- Ans
- 1. Jabalpur
 - 2. Raisen
 - 3. Purnia
 - 4. Patna

Question ID : 65497828627
Status : Not Answered
Chosen Option : --

Q.24 Which of the following countries performed its first robotic docking in lunar orbit?

- Ans
- 1. Russia
 - 2. China
 - 3. India
 - 4. Japan

Question ID : 65497828632
Status : Not Answered
Chosen Option : --

Q.25 Which of the following books was written by Banabhatta?

- Ans
- 1. Ashtadhyayi
 - 2. Akbarnama
 - 3. Harshacharita
 - 4. Malavikagnimitram

Question ID : 65497828639
Status : Answered
Chosen Option : 3

Section : Part C Elementary Mathematics

Q.1 The average of the first five multiples of 13 is:

- Ans
- 1. 13
 - 2. 39
 - 3. 65
 - 4. 26

Question ID : 65497828651
Status : Answered
Chosen Option : 2

Q.2 The compound interest compounded annually on a sum of money for 2 years is ₹1,128.6 and the simple interest on the same sum for the same period is ₹1,080. What is the difference between the compound interest compounded annually and the simple interest for 3 years?

- Ans**
- 1. ₹165.174
 - 2. ₹170.174
 - 3. ₹150.174
 - 4. ₹160.174

Question ID : 65497828663

Status : **Not Attempted and Marked For Review**

Chosen Option : --

Q.3 Two trains of lengths 120 m and 180 m are travelling in opposite directions at the uniform speed of 34 km/h and 32 km/h. The time taken by the two trains to pass each other is:

- Ans**
- 1. 180/11 sec
 - 2. 17 sec
 - 3. 15.5 sec
 - 4. 16 sec

Question ID : 65497828659

Status : **Answered**

Chosen Option : 1

Q.4 A person purchased a machine for ₹50,000 and fixed the marked price 20% higher than the cost price and sold it at a discount of 15%. The percentage profit or loss is:

- Ans**
- 1. 1% loss
 - 2. 2.5% profit
 - 3. 4% loss
 - 4. 2% profit

Question ID : 65497828656

Status : **Answered**

Chosen Option : 4

Q.5 If $P = a^3 \times b^5 \times c^{11}$, $Q = a^8 \times b^9 \times c^5$, $R = a^{15} \times c^{23}$, then what is the HCF of P, Q and R?

- Ans**
- 1. $a^3 \times c^5$
 - 2. $a^{15} \times b^9 \times c^{23}$
 - 3. $a \times c$
 - 4. $a^{26} \times b^{14} \times c^{39}$

Question ID : 65497828643

Status : **Answered**

Chosen Option : 1

Q.6 A sum fetched a total simple interest of ₹5,427 at the rate of 9% p.a. in 6 years. What is the sum?

- Ans
- 1. ₹54,010
 - 2. ₹10,050
 - 3. ₹10,002
 - 4. ₹54,270

Question ID : 65497828653
Status : Answered
Chosen Option : 2

Q.7 A's income is 25% more than that of B. B's income is less than A's income in percentage of:

- Ans
- 1. 15%
 - 2. 20%
 - 3. 11%
 - 4. 18%

Question ID : 65497828657
Status : Answered
Chosen Option : 2

Q.8 ₹13,540 is to be divided between Kamal and Sunita such that Kamal's share at the end of 5 years may be equal to Sunita's share at the end of 7 years. If the rate of interest is 8% per annum compounded annually, then Kamal's share is:

- Ans
- 1. ₹7,280
 - 2. ₹7,290
 - 3. ₹8,240
 - 4. ₹7,390

Question ID : 65497828647
Status : Not Answered
Chosen Option : --

Q.9 The value of $\frac{1}{2}$ of $\frac{1}{3} - \frac{2}{3}$ of $\frac{4}{5} + 4 \div 7 + 3$ of $7 \div 2$ is:

- Ans
- 1. $\frac{1124}{105}$
 - 2. $\frac{1024}{105}$
 - 3. $\frac{1104}{105}$
 - 4. $\frac{1224}{105}$

Question ID : 65497828660
Status : Answered
Chosen Option : 1

Q.10 The perimeter of a square is 64 cm . The area of a rectangle is 16 cm^2 less than the area of the square. If the length of the rectangle is 20 cm , what is the perimeter of the rectangle?

- Ans**
- 1. 12 cm
 - 2. 15 cm
 - 3. 18 cm
 - 4. 64 cm

Question ID : 65497828664
Status : Answered
Chosen Option : 4

Q.11 The value of $2 \times 7 \div 14$ of $4 - 5 \div 4 \times (9 - 11) + 2 - 2 \times 6 \div 8$ of 3 , is:

- Ans**
- 1. $3\frac{1}{2}$
 - 2. $4\frac{1}{4}$
 - 3. $2\frac{1}{2}$
 - 4. $4\frac{3}{4}$

Question ID : 65497828665
Status : Not Attempted and Marked For Review
Chosen Option : --

Q.12 What is the greatest number which leaves the same remainder in each case, when divides 265, 580 and 825?

- Ans**
- 1. 35
 - 2. 55
 - 3. 25
 - 4. 45

Question ID : 65497828650
Status : Not Attempted and Marked For Review
Chosen Option : --

Q.13 A driver drives a car at a uniform speed of 60 km/h and reaches the 330 km destination by 30 min late. To reach on time, the % increase in speed will be:

- Ans**
- 1. 15%
 - 2. 10%
 - 3. 12%
 - 4. 20%

Question ID : 65497828658
Status : Answered
Chosen Option : 2

Q.14 A train moves at a speed of 70 km/h for 5 hours and stops at station 'A'. From station 'A', the train moves to station 'B' at a speed of 66 km/h for 3 hours. What is the total distance covered by the train?

- Ans**
- 1. 520 km
 - 2. 548 km
 - 3. 500 km
 - 4. 480 km

Question ID : 65497828661
Status : Answered
Chosen Option : 2

Q.15 Two-third of the loss of A is equal to five-seventh of the profit of B. If the loss of A is ₹2,460, then how much (correct to 2 decimal places) percentage of the profit of B is the loss of A?

- Ans**
- 1. 107.27%
 - 2. 107.14%
 - 3. 93.67%
 - 4. 93.33%

Question ID : 65497828644
Status : Answered
Chosen Option : 4

Q.16 If $0.45 : x :: 3 : 8$, then x is equal to:

- Ans**
- 1. 1.3
 - 2. 1.2
 - 3. 1.4
 - 4. 2.2

Question ID : 65497828648
Status : Answered
Chosen Option : 2

Q.17 There are three numbers such that the first number is 3 times the second number and the second number is half of the third number. Their average is 60. The third number is:

- Ans**
- 1. 120
 - 2. 60
 - 3. 30
 - 4. 90

Question ID : 65497828655
Status : Answered
Chosen Option : 2

Q.18 A can complete $\frac{3}{8}$ of a certain work in 9 days and B can complete 80% of the same work in 16 days. Both work together for 5 days. C alone completes the remaining work in $6\frac{1}{2}$ days. A and C together will complete the whole work in:

- Ans**
- 1. 9 days
 - 2. 10 days
 - 3. 8 days
 - 4. 6 days

Question ID : 65497828667
Status : Answered
Chosen Option : 3

Q.19 A person purchased a refrigerator for ₹18,000. After two years, he spent ₹2,500 on its repair and sold it for ₹12,300. The percentage loss is:

- Ans**
- 1. 42%
 - 2. 46%
 - 3. 40%
 - 4. 44%

Question ID : 65497828654
Status : Answered
Chosen Option : 3

Q.20 A pond is 50 m long, 25 m wide and 4 m deep. Find the capacity of the pond (in m^3).

- Ans**
- 1. 4000
 - 2. 500
 - 3. 5000
 - 4. 2500

Question ID : 65497828649
Status : Answered
Chosen Option : 3

Q.21 A boy who is 7 feet tall can cast a shadow that is 21 feet long on the ground. How tall (in feet) is a man who can cast a shadow that is 15 feet long?

- Ans**
- 1. 6.5
 - 2. 5.5
 - 3. 6
 - 4. 5

Question ID : 65497828652
Status : Answered
Chosen Option : 4

Q.22 The difference between the selling prices of an article sold at a discount of $14\frac{1}{2}\%$ and $10\frac{1}{2}\%$ is 48. If the marked price is 25% more than the cost price, then the cost price of the article is:

- Ans**
- 1. ₹860
 - 2. ₹950
 - 3. ₹920
 - 4. ₹960

Question ID : 65497828645
Status : Answered
Chosen Option : 4

Q.23 By selling an article for ₹340, a trader loses 20%. To gain 15%, he must sell it for:

- Ans**
- 1. ₹488.75
 - 2. ₹475.50
 - 3. ₹455.75
 - 4. ₹517.50

Question ID : 65497828666
Status : Answered
Chosen Option : 1

Q.24 Some articles are sold in such a way that the cost price of 60% of the articles is equal to the selling price of 40% of the articles. The profit percentage is:

- Ans**
- 1. 35
 - 2. 40
 - 3. 45
 - 4. 50

Question ID : 65497828646
Status : Answered
Chosen Option : 4

Q.25 Rohith and Manoj together have ₹1,320. If $\frac{10}{21}$ of Rohith's amount equals to $\frac{5}{7}$ of Manoj's amount, how much amount does Rohith have?

- Ans**
- 1. ₹320
 - 2. ₹328
 - 3. ₹792
 - 4. ₹980

Question ID : 65497828662
Status : Not Answered
Chosen Option : --

Q.1 Select the most appropriate ANTONYM of the given word.

Monumental

- Ans
- 1. Mysterious
 - 2. Insignificant
 - 3. Important
 - 4. Enormous

Question ID : 65497828678
Status : Answered
Chosen Option : 4

Q.2 Select the option that can be used as a one-word substitute for the given group of words.

A large cage, building or enclosure for keeping birds in

- Ans
- 1. Aviary
 - 2. Apiary
 - 3. Asylum
 - 4. Aquarium

Question ID : 65497828674
Status : Answered
Chosen Option : 1

Q.3 Select the most appropriate option to fill in the blank.

The police later _____ that one of the thieves had been arrested.

- Ans
- 1. abandoned
 - 2. confirmed
 - 3. commenced
 - 4. analysed

Question ID : 65497828671
Status : Answered
Chosen Option : 2

Q.4 Select the option that can be used as a one-word substitute for the given group of words.

A system of society or government in which men hold the power and women are largely excluded from it

- Ans
- 1. Matriarchy
 - 2. Masculinity
 - 3. Patrilineal
 - 4. Patriarchy

Question ID : 65497828681
Status : Answered
Chosen Option : 4

Q.5 Select the **INCORRECTLY** spelt word.

- Ans 1. Nineteen
 2. Neutrelise
 3. Noun
 4. Nationalise

Question ID : 65497828682
Status : Answered
Chosen Option : 2

Q.6 Select the most appropriate meaning of the given idiom.

In the long run

- Ans 1. Immediately
 2. Occasionally
 3. Ultimately
 4. Regularly

Question ID : 65497828670
Status : Answered
Chosen Option : 3

Q.7 Select the most appropriate option to fill in the blank.

There are various legends associated with the _____ of the state of Kerala.

- Ans 1. source
 2. basis
 3. root
 4. origin

Question ID : 65497828676
Status : Not Answered
Chosen Option : --

Q.8 Select the most appropriate **SYNONYM** of the given word.

Lure

- Ans 1. Attack
 2. Amend
 3. Attract
 4. Arise

Question ID : 65497828686
Status : Answered
Chosen Option : 3

Q.9 Parts of the given sentence have been given as options. One of them contains a grammatical error. Select the option that has the error.

Educational institutions have been notify to open from 17th November for higher semester students who are engaged in research.

- Ans
- 1. open from
 - 2. are engaged
 - 3. have been notify
 - 4. for higher semester students

Question ID : 65497828679
Status : Answered
Chosen Option : 3

Q.10 Select the most appropriate option that can substitute the underlined segment in the given sentence. If there is no need to substitute it, select 'No substitution required'.

I started early from office, lest I should not get caught in the rain.

- Ans
- 1. lest I will not get caught
 - 2. lest that I get caught
 - 3. No substitution required'
 - 4. lest I should get caught

Question ID : 65497828684
Status : Answered
Chosen Option : 4

Q.11 Select the most appropriate option to fill in the blank.

My classmate is _____ of my achievement.

- Ans
- 1. jealous
 - 2. bitter
 - 3. zealous
 - 4. sad

Question ID : 65497828677
Status : Answered
Chosen Option : 1

Q.12 Select the most appropriate synonym of the given word.

Desert

- Ans
- 1. Help
 - 2. Support
 - 3. Abandon
 - 4. Stay

Question ID : 65497828669
Status : Answered
Chosen Option : 3

Q.13 The following sentence has been divided into parts. One of them may contain an error. Select the part that contains the error from the given options. If you don't find any error, mark 'No error' as your answer.

He want / to have / some more rice.

- Ans 1. He want
 2. No error
 3. to have
 4. some more rice

Question ID : 65497828668
Status : Answered
Chosen Option : 1

Q.14 Select the most appropriate option that can substitute the underlined segment in the given sentence. If there is no need to substitute it, select 'No substitution required'.

I am living in this city for several years but have never experienced any discrimination.

- Ans 1. had lived
 2. No substitution required'
 3. was lived
 4. have lived

Question ID : 65497828683
Status : Answered
Chosen Option : 2

Q.15 Select the most appropriate ANTONYM of the given word.

Tropical

- Ans 1. Cold
 2. Lush
 3. Equatorial
 4. Sultry

Question ID : 65497828680
Status : Answered
Chosen Option : 1

Q.16 Select the option that can be used as a one-word substitute for the given group of words.

Fit to be eaten

- Ans 1. Tasty
 2. Delicious
 3. Potable
 4. Edible

Question ID : 65497828687
Status : Answered
Chosen Option : 4

Q.17 The following sentence has been split into four segments. Identify the segment that contains a grammatical error.

He has been talking / since two hours / and is still / not tired.

- Ans
- 1. He has been ta king
 - 2. since two hours
 - 3. not tired
 - 4. and is still

Question ID : 65497828685
Status : Answered
Chosen Option : 2

Q.18 Select the most appropriate meaning of the given idiom.

Monkey business

- Ans
- 1. Dealing in the supply of monkeys
 - 2. Actions that imitate other animals
 - 3. Carrying out business related to monkeys
 - 4. Behaviour that is not acceptable or is dishonest

Question ID : 65497828673
Status : Answered
Chosen Option : 4

Q.19 Select the most appropriate option that can substitute the underlined word in the given sentence.

In India, there are not enough job employability.

- Ans
- 1. invincibility
 - 2. productivities
 - 3. profitability
 - 4. opportunities

Question ID : 65497828672
Status : Answered
Chosen Option : 4

Q.20 Select the INCORRECTLY spelt word.

- Ans
- 1. Exclaim
 - 2. Express
 - 3. Comunity
 - 4. Array

Question ID : 65497828675
Status : Answered
Chosen Option : 3

Comprehension:

In the following passage, some words have been deleted. Read the passage carefully and select the most appropriate option to fill in each blank.

The predominantly deltaic eastern coastal plain is an area of deep sedimentation. Over (1) _____ of its length it is considerably wider (2) _____ the plain on the western coast. (3) _____ major deltas, from south to north, (4) _____ of the Kaveri, the Krishna-Godavari, the Mahanadi, and the Ganges-Brahmaputra rivers. The last of (5) _____ is some 190 miles (300 km) wide, but only about one-third of it lies within India.

SubQuestion No : 21

Q.21 Select the most appropriate option to fill in blank no. 1.

- Ans
- 1. more
 - 2. many
 - 3. maximum
 - 4. most

Question ID : 65497828689
Status : Answered
Chosen Option : 4

Comprehension:

In the following passage, some words have been deleted. Read the passage carefully and select the most appropriate option to fill in each blank.

The predominantly deltaic eastern coastal plain is an area of deep sedimentation. Over (1) _____ of its length it is considerably wider (2) _____ the plain on the western coast. (3) _____ major deltas, from south to north, (4) _____ of the Kaveri, the Krishna-Godavari, the Mahanadi, and the Ganges-Brahmaputra rivers. The last of (5) _____ is some 190 miles (300 km) wide, but only about one-third of it lies within India.

SubQuestion No : 22

Q.22 Select the most appropriate option to fill in blank no. 2.

- Ans
- 1. then
 - 2. there
 - 3. than
 - 4. that

Question ID : 65497828690
Status : Answered
Chosen Option : 3

Comprehension:

In the following passage, some words have been deleted. Read the passage carefully and select the most appropriate option to fill in each blank.

The predominantly deltaic eastern coastal plain is an area of deep sedimentation. Over (1) _____ of its length it is considerably wider (2) _____ the plain on the western coast. (3) _____ major deltas, from south to north, (4) _____ of the Kaveri, the Krishna-Godavari, the Mahanadi, and the Ganges-Brahmaputra rivers. The last of (5) _____ is some 190 miles (300 km) wide, but only about one-third of it lies within India.

SubQuestion No : 23

Q.23 Select the most appropriate option to fill in blank no. 3

- Ans
- 1. Specific
 - 2. The
 - 3. Few
 - 4. Such

Question ID : 65497828691
Status : Answered
Chosen Option : 2

Comprehension:

In the following passage, some words have been deleted. Read the passage carefully and select the most appropriate option to fill in each blank.

The predominantly deltaic eastern coastal plain is an area of deep sedimentation. Over (1) _____ of its length it is considerably wider (2) _____ the plain on the western coast. (3) _____ major deltas, from south to north, (4) _____ of the Kaveri, the Krishna-Godavari, the Mahanadi, and the Ganges-Brahmaputra rivers. The last of (5) _____ is some 190 miles (300 km) wide, but only about one-third of it lies within India.

SubQuestion No : 24

Q.24 Select the most appropriate option to fill in blank no. 4.

- Ans 1. are
 2. had been
 3. were
 4. have been

Question ID : 65497828692
Status : Answered
Chosen Option : 1

Comprehension:

In the following passage, some words have been deleted. Read the passage carefully and select the most appropriate option to fill in each blank.

The predominantly deltaic eastern coastal plain is an area of deep sedimentation. Over (1) _____ of its length it is considerably wider (2) _____ the plain on the western coast. (3) _____ major deltas, from south to north, (4) _____ of the Kaveri, the Krishna-Godavari, the Mahanadi, and the Ganges-Brahmaputra rivers. The last of (5) _____ is some 190 miles (300 km) wide, but only about one-third of it lies within India.

SubQuestion No : 25

Q.25 Select the most appropriate option to fill in blank no. 5.

- Ans 1. this
 2. that
 3. them
 4. whom

Question ID : 65497828693
Status : Answered
Chosen Option : 3

Section : Part D Hindi

Q.1 नीचे दिए वाक्य में रिक्त-स्थान भरने के लिए सबसे उपयुक्त शब्द का चयन करें।

रात को उल्लुओं के _____ की आवाज़ें आ रही थी।

- Ans 1. घुघुआने
 2. कूजने
 3. टरनि
 4. रेंकने

Question ID : 65497828708
Status : Not Answered
Chosen Option : --

Q.2 विलोम शब्दों के सही युग्म का चयन करें:

- Ans
- 1. भय - डर
 - 2. शरीर - देह
 - 3. न कहने योग्य - अकथ
 - 4. आदि - अत

Question ID : 65497828711
Status : Not Answered
Chosen Option : --

Q.3 दिए गए वाक्य में रेखांकित खंड को प्रतिस्थापित करने के लिए सबसे उपयुक्त विकल्प का चयन करें।
यदि इसे प्रतिस्थापित करने की आवश्यकता नहीं है, तो विकल्प 'किसी बदलाव की आवश्यकता नहीं है'
का चयन करें।

वह नहीं समझेगा इसलिए वह मूर्ख है।

- Ans
- 1. इसके कारण
 - 2. क्योंकि
 - 3. अतः
 - 4. किसी बदलाव की आवश्यकता नहीं है।

Question ID : 65497828696
Status : Not Answered
Chosen Option : --

Q.4 रिक्त स्थान भरने के लिए सबसे उपयुक्त शब्द का चयन करें-

उनकी आपस में _____ हो गई।

- Ans
- 1. लबझड़
 - 2. खटपट
 - 3. फटफट
 - 4. गड़बड़

Question ID : 65497828698
Status : Not Answered
Chosen Option : --

Q.5 दिये गये वाक्य में रेखांकित अंश को प्रतिस्थापित करने के लिए सबसे उपयुक्त विकल्प का चयन करें।

इस गीत की दो चार लड़ियाँ सुना दो।

- Ans
- 1. कड़ियाँ
 - 2. झड़ियाँ
 - 3. छद
 - 4. कविता

Question ID : 65497828709
Status : Not Answered
Chosen Option : --

Q.6 दिए गए शब्द के समानार्थी शब्द का चयन करें।

सुधा

- Ans
- 1. द्रव्य
 - 2. पीयूष
 - 3. वारि
 - 4. पावन

Question ID : 65497828700
Status : Not Answered
Chosen Option : --

Q.7 माल-सामान की बिक्री करनेवाला

शब्द समूह के स्थान पर एक शब्द लिखिए-

- Ans
- 1. क्रेता
 - 2. ग्राहक
 - 3. बुभुक्षा
 - 4. विक्रेता

Question ID : 65497828713
Status : Not Answered
Chosen Option : --

Q.8 दिए गए वाक्य में रेखांकित खंड को प्रतिस्थापित करने के लिए सबसे उपयुक्त विकल्प का चयन करें।
यदि इसे प्रतिस्थापित करने की आवश्यकता नहीं है, तो विकल्प 'किसी बदलाव की आवश्यकता नहीं है'
का चयन करें।

थोड़ी देर बाद वे वापस लौट आये।

- Ans
- 1. किसी बदलाव की आवश्यकता नहीं है।
 - 2. वे वापसी लौट आये
 - 3. वे लौट आये वापस
 - 4. वे लौट आये

Question ID : 65497828705
Status : Not Answered
Chosen Option : --

Q.9 दिए गए वाक्य का वह भाग ज्ञात करें जिसमें कोई त्रुटि है। यदि कोई त्रुटि नहीं है, तो 'कोई त्रुटि नहीं है'
चुनें।

गणतंत्र दिवस की परेड को (1)/ लाखों बालक, वृद्ध नर और नारी (2)/ देख रही थी। (3)/ कोई त्रुटि नहीं है(4)

- Ans
- 1. 3
 - 2. 4
 - 3. 1
 - 4. 2

Question ID : 65497828703
Status : Not Answered
Chosen Option : --

Q.10 मेरे से प्रश्न मत पूछना - रेखांकित शब्द की त्रुटि पहचानिए-

- Ans
- 1. क्रिया विशेष के कारण
 - 2. सर्वनाम के कारण
 - 3. विशेषण के कारण
 - 4. सज्ञा के कारण

Question ID : 65497828710
Status : Not Answered
Chosen Option : --

Q.11 बिना पलक झपकाए - वाक्यांश के लिए एक शब्द है:

- Ans
- 1. निर्निमेष
 - 2. पलक
 - 3. निमेष
 - 4. मेष

Question ID : 65497828712
Status : Not Answered
Chosen Option : --

Q.12 दिए गए शब्द का विलोम चुनें-

सौम्य

- Ans
- 1. स्तुत्य
 - 2. उग्र
 - 3. निद्य
 - 4. सेवित

Question ID : 65497828706
Status : Not Answered
Chosen Option : --

Q.13 दिए गए वाक्य का वो भाग ज्ञात करें जिसमें कोई त्रुटि है। यदि कोई त्रुटि नहीं है, तो 'कोई त्रुटि नहीं है' चुनें।

रण में सेनापति के वीरता (1)\ दिखाने का कारण राष्ट्रपति ने (2)\ उसे वीरचक्र प्रदान किया। (3)\ कोई त्रुटि नहीं है (4)

- Ans
- 1. 4
 - 2. 1
 - 3. 2
 - 4. 3

Question ID : 65497828699
Status : Not Answered
Chosen Option : --

Q.14 'जिसकी जड़ या आधार का पता न हो' इस वाक्यांश के लिए एक सार्थक शब्द दीजिए।

- Ans
- 1. निर्दय
 - 2. निर्मम
 - 3. निर्भय
 - 4. निर्मूल

Question ID : 65497828694
Status : Not Answered
Chosen Option : --

Q.15 दिए गए चार विकल्पों में से, उस विकल्प का चयन करें, जो नीचे दिए मुहावरे का अर्थ व्यक्त करता है।

भागीरथ प्रयत्न

- Ans
- 1. प्रयास न करना
 - 2. उनकी कोशिश
 - 3. थोड़ा प्रयास
 - 4. भारी कोशिश

Question ID : 65497828707
Status : Not Answered
Chosen Option : --

Q.16 सही वर्तनी वाले शब्द का चयन करें।

- Ans
- 1. शैछणिक
 - 2. शिक्षणिक
 - 3. शैक्षणिक
 - 4. सैक्षणिक

Question ID : 65497828702
Status : Not Answered
Chosen Option : --

Q.17 सही वर्तनी वाले शब्द का चयन करें।

- Ans
- 1. अरण्य
 - 2. अरिण्य
 - 3. अरन्य
 - 4. अरिन्य

Question ID : 65497828701
Status : Not Answered
Chosen Option : --

Q.18 रिक्त स्थान को भरने के लिए सबसे उपयुक्त शब्द का चयन कीजिए।

पृथ्वी का _____ गोल है।

- Ans
- 1. स्वरूप
 - 2. क्षमता
 - 3. रूप
 - 4. आकार

Question ID : 65497828695
Status : Not Answered
Chosen Option : --

Q.19 'कमर कसना' मुहावरे का अर्थ बताइए-

- Ans
- 1. तैयार होना
 - 2. दर्द होना
 - 3. हौसला हारना
 - 4. सहारा देना

Question ID : 65497828697
Status : Not Answered
Chosen Option : --

Q.20 दिए गए शब्द के समानार्थी शब्द का चयन करें।

अमृत

- Ans
- 1. अद्भुत
 - 2. वसुधा
 - 3. अलौकिक
 - 4. सुधा

Question ID : 65497828704

Status : Not Answered

Chosen Option : --

Comprehension:

निम्नलिखित गद्यांश को पढ़कर प्रश्नों के उचित उत्तर दीजिए-

प्राचीन काल में नारी का स्थान बहुत ही महत्वपूर्ण था। ऐसा कहा जाता है कि "जहाँ नारी की पूजा होती है, वहाँ देवता निवास करते हैं" मध्यकालीन युग से नारी का पतन शुरू हो गया। नारी को दासी या गुलाम माना जाने लगा। नारी घर में ही कैद हो गई। 19वीं सदी में राजा राममोहन राय, स्वामी विवेकानंद, दयानंद सरस्वती आदि महानुभावों ने समाज सुधारकों के प्रयासों से नारी अबला से सबला बनती गई। सम्पूर्ण कायापलट हो गयी। नारी प्रगति के पथ पर निरंतर आगे बढ़ती गयी, आज की नारी ने जमीन से लेकर अंतरिक्ष तक अपना कब्जा जमाया है। नर और नारी रथ के दो पहिये हैं, रथ को सुव्यवस्थित चलाने के लिए सतुलन होना चाहिए, तो ही परिवार सुख से जीता है। शिक्षित नारी परिवार की उद्धारक है। प्रत्येक घर में नारी का सम्मान होना चाहिए। समाज में प्रचलित कुरीतियों को दूर करने में दोनों को एक दूसरे का सहयोगी बनना चाहिए। नारी का उद्धार देश का उद्धार है। अर्थात् नारी को सदैव सम्मान देना चाहिए।

SubQuestion No : 21

Q.21 आकाश- कौन-सा शब्द रेखांकित शब्द का पर्याय नहीं है?

- Ans
- 1. नभ
 - 2. गगन
 - 3. अम्बर
 - 4. अतल

Question ID : 65497828715

Status : Not Answered

Chosen Option : --

Comprehension:

निम्नलिखित गद्यांश को पढ़कर प्रश्नों के उचित उत्तर दीजिए-

प्राचीन काल में नारी का स्थान बहुत ही महत्वपूर्ण था। ऐसा कहा जाता है कि "जहाँ नारी की पूजा होती है, वहाँ देवता निवास करते हैं" मध्यकालीन युग से नारी का पतन शुरू हो गया। नारी को दासी या गुलाम माना जाने लगा। नारी घर में ही कैद हो गई। 19वीं सदी में राजा राममोहन राय, स्वामी विवेकानंद, दयानंद सरस्वती आदि महानुभावों ने समाज सुधारकों के प्रयासों से नारी अबला से सबला बनती गई। सम्पूर्ण कायापलट हो गयी। नारी प्रगति के पथ पर निरंतर आगे बढ़ती गयी, आज की नारी ने जमीन से लेकर अंतरिक्ष तक अपना कब्जा जमाया है। नर और नारी रथ के दो पहिये हैं, रथ को सुव्यवस्थित चलाने के लिए सतुलन होना चाहिए, तो ही परिवार सुख से जीता है। शिक्षित नारी परिवार की उद्धारक है। प्रत्येक घर में नारी का सम्मान होना चाहिए। समाज में प्रचलित कुरीतियों को दूर करने में दोनों को एक दूसरे का सहयोगी बनना चाहिए। नारी का उद्धार देश का उद्धार है। अर्थात् नारी को सदैव सम्मान देना चाहिए।

SubQuestion No : 22

Q.22 अबला रेखांकित शब्द का विलोम बताइए।

- Ans
- 1. नारी
 - 2. दासी
 - 3. दुर्बल
 - 4. सबला

Question ID : 65497828716

Status : Not Answered

Chosen Option : --

Comprehension:

निम्नलिखित गद्यांश को पढ़कर प्रश्नों के उचित उत्तर दीजिए-

प्राचीन काल में नारी का स्थान बहुत ही महत्वपूर्ण था। ऐसा कहा जाता है कि "जहाँ नारी की पूजा होती है, वहाँ देवता निवास करते हैं" मध्यकालीन युग से नारी का पतन शुरू हो गया। नारी को दासी या गुलाम माना जाने लगा। नारी घर में ही कैद हो गई। 19वीं सदी में राजा राममोहन राय, स्वामी विवेकानंद, दयानंद सरस्वती आदि महानुभावों एव समाज सुधारकों के प्रयासों से नारी अबला से सबला बनती गई। सम्पूर्ण कायापलट हो गयी। नारी प्रगति के पथ पर निरंतर आगे बढ़ती गयी, आज की नारी ने जमीन से लेकर अबर तक अपना कब्जा जमाया है। नर और नारी रथ के दो पहिये हैं, रथ को सुव्यवस्थित चलाने के लिए सतुलन होना चाहिए, तो ही परिवार सुख से जीता है। शिक्षित नारी परिवार की उद्धारक है। प्रत्येक घर में नारी का सम्मान होना चाहिए। समाज में प्रचलित कुरीतियों को दूर करने में दोनों को एक दूसरे का सहयोगी बनना चाहिए। नारी का उद्धार देश का उद्धार है। अर्थात् नारी को सदैव सम्मान देना चाहिए।

SubQuestion No : 23

Q.23 एक दूसरे का _____ बनना चाहिए। रिक्त स्थान की पूर्ति कीजिए।

- Ans
- 1. सयोगी
 - 2. सहयोगी
 - 3. सहाय
 - 4. असहयोगी

Question ID : 65497828717

Status : Not Answered

Chosen Option : --

Comprehension:

निम्नलिखित गद्यांश को पढ़कर प्रश्नों के उचित उत्तर दीजिए-

प्राचीन काल में नारी का स्थान बहुत ही महत्वपूर्ण था। ऐसा कहा जाता है कि "जहाँ नारी की पूजा होती है, वहाँ देवता निवास करते हैं" मध्यकालीन युग से नारी का पतन शुरू हो गया। नारी को दासी या गुलाम माना जाने लगा। नारी घर में ही कैद हो गई। 19वीं सदी में राजा राममोहन राय, स्वामी विवेकानंद, दयानंद सरस्वती आदि महानुभावों एव समाज सुधारकों के प्रयासों से नारी अबला से सबला बनती गई। सम्पूर्ण कायापलट हो गयी। नारी प्रगति के पथ पर निरंतर आगे बढ़ती गयी, आज की नारी ने जमीन से लेकर अबर तक अपना कब्जा जमाया है। नर और नारी रथ के दो पहिये हैं, रथ को सुव्यवस्थित चलाने के लिए सतुलन होना चाहिए, तो ही परिवार सुख से जीता है। शिक्षित नारी परिवार की उद्धारक है। प्रत्येक घर में नारी का सम्मान होना चाहिए। समाज में प्रचलित कुरीतियों को दूर करने में दोनों को एक दूसरे का सहयोगी बनना चाहिए। नारी का उद्धार देश का उद्धार है। अर्थात् नारी को सदैव सम्मान देना चाहिए।

SubQuestion No : 24

Q.24 मध्यकालीन युग में नारी की स्थिति क्या थी?

- Ans
- 1. दासी
 - 2. पूजनीय थी
 - 3. शिक्षित थी
 - 4. महत्वपूर्ण स्थान था

Question ID : 65497828718

Status : Not Answered

Chosen Option : --

Comprehension:

निम्नलिखित गद्यांश को पढ़कर प्रश्नों के उचित उत्तर दीजिए-

प्राचीन काल में नारी का स्थान बहुत ही महत्वपूर्ण था। ऐसा कहा जाता है कि "जहाँ नारी की पूजा होती है, वहाँ देवता निवास करते हैं" मध्यकालीन युग से नारी का पतन शुरू हो गया। नारी को दासी या गुलाम माना जाने लगा। नारी घर में ही कैद हो गई। 19वीं सदी में राजा राममोहन राय, स्वामी विवेकानंद, दयानंद सरस्वती आदि महानुभावों एवं समाज सुधारकों के प्रयासों से नारी अबला से सबला बनती गई। सम्पूर्ण कायापलट हो गयी। नारी प्रगति के पथ पर निरंतर आगे बढ़ती गयी, आज की नारी ने जमीन से लेकर अंतरिक्ष तक अपना कब्जा जमाया है। नर और नारी रथ के दो पहिये हैं, रथ को सुव्यवस्थित चलाने के लिए सतुलन होना चाहिए, तो ही परिवार सुख से जीता है। शिक्षित नारी परिवार की उद्धारक है। प्रत्येक घर में नारी का सम्मान होना चाहिए। समाज में प्रचलित कुरीतियों को दूर करने में दोनों को एक-दूसरे का सहयोगी बनना चाहिए। नारी का उद्धार देश का उद्धार है। अर्थात् नारी को सदैव सम्मान देना चाहिए।

SubQuestion No : 25

Q.25 गद्यांश का उचित शीर्षक बताइए।

- Ans**
- 1. यदि मैं शिक्षक बनूँ...!
 - 2. मेरे सपनों का भारत
 - 3. नारी तू नारायणी
 - 4. दहेज प्रथा

Question ID : 65497828719

Status : Not Answered

Chosen Option : --

PRACTICE

MOCK