

PRACTICE **MOCK**

GET IT ON  
Google Play



# CRACK SSC EXAMS

WITH QUALITY MOCK TEST SERIES

SSC GD  
CONSTABLE

~~199/-~~  
**159/-**

PM SSC  
PRO  
6 MONTHS

**249/-**

PM SSC  
PRO  
12 MONTHS

**399/-**

PM PREMIUM  
PACKAGE  
Banking, SSC & Others

**999/-**

## Features

- \* Free PDFs
- \* Test Series
- \* Live Mocks
- \* Free Classes
- \* Free Quizzes

SSC GD Constable Free  
Crash Course 2022

**Previous Year Paper**

DOWNLOAD **FREE** PDF

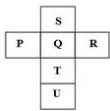




Exam Date	29/11/2021
Exam Time :	9:00 AM - 10:30 AM
Subject	Constable GD 2021

Section : Part A General Intelligence and Reasoning

**Q.1** A cube is made by folding the given sheet. In the cube so formed, which letter will be on the face opposite to the face having the letter 'Q'?



- Ans
- 1. R
  - 2. T
  - 3. U
  - 4. S

PRACTICE MOCK

Question ID : 65497830898  
Status : Answered  
Chosen Option : 3

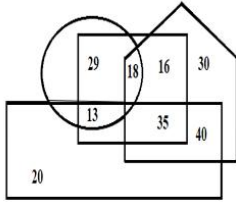
**Q.2** Select the figure from among the given options that can replace the question mark (?) in the following series.



- Ans
- 1.
  - 2.
  - 3.
  - 4.

Question ID : 65497830897  
Status : Answered  
Chosen Option : 1

**Q.3** In the following figure, the pentagon represents 'Nepali words', the circle represents 'Hindi words', the rectangle represents 'English words', and the square represents 'Persian words'.



Which number represents the words of English and Persian that are included in Hindi words?

- Ans**
- 1. 29
  - 2. 35
  - 3. 13
  - 4. 16

Question ID : 65497830903  
Status : Answered  
Chosen Option : 3

**Q.4** Four letter-clusters have been given, out of which three are alike in some manner and one is different. Select the letter-cluster that is different.

- Ans**
- 1. JMO
  - 2. SVY
  - 3. RUW
  - 4. NQS

Question ID : 65497830887  
Status : Answered  
Chosen Option : 2

PRACTICE

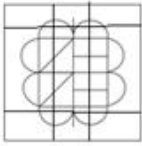
MOCK

**Q.5** Select the option in which the given figure is embedded (rotation is NOT allowed).

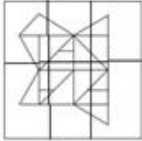


**Ans**

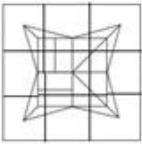
1.



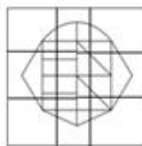
2.



3.



4.



Question ID : 65497830899  
Status : Answered  
Chosen Option : 4

**Q.6** Select the letter-cluster from among the given options that can replace the question mark (?) in the following series.

BY, FU, JQ, NM, RI, ?

**Ans**  1. UE

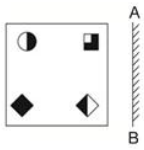
2. WD

3. EV

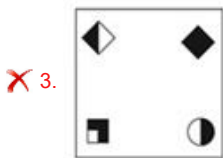
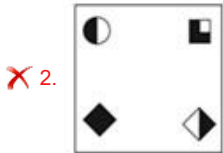
4. VE

Question ID : 65497830900  
Status : Answered  
Chosen Option : 4

Q.7 Select the correct mirror image of the given figure when the mirror is placed at 'AB' as shown.



Ans



Question ID : 65497830890  
 Status : Answered  
 Chosen Option : 1

Q.8 In a certain code language, 'ATUL' is coded as '1-20-21-12' and 'RAJU' is coded as '18-1-10-21'. How will 'GITA' be coded in that language?

- Ans
- ✗ 1. 5-11-22-1
  - ✗ 2. 8-9-20-1
  - ✓ 3. 7-9-20-1
  - ✗ 4. 6-10-20-1

Question ID : 65497830888  
 Status : Answered  
 Chosen Option : 3

Q.9 Select the option that is related to the third number in the same way as the second number is related to the first number.

154 : 10 :: 261 : ?

- Ans
- ✗ 1. 10
  - ✓ 2. 9
  - ✗ 3. 7
  - ✗ 4. 8

Question ID : 65497830895  
 Status : Answered  
 Chosen Option : 2

Q.10 In an imaginary mathematical system, symbol '@' stands for addition, symbol '\$' stands for division, symbol '&' stands for subtraction, and symbol '#' stands for multiplication. What is the value of the following expression?

165 \$ 11 # 15 & 4 @ 6

Ans  1. 227

2. 352

3. 355

4. 157

Question ID : 65497830896

Status : Answered

Chosen Option : 1

Q.11 Manoj is the father of Kapil. Kapil is the only son of Maya. Kavya is the daughter of Maya. Neha is the only daughter of Kavya. How is Kapil related to Neha?

Ans  1. Brother

2. Father

3. Paternal Grandfather

4. Maternal uncle

Question ID : 65497830886

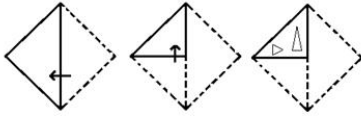
Status : Answered

Chosen Option : 4

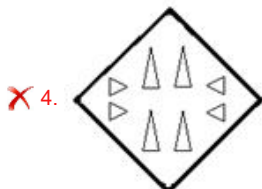
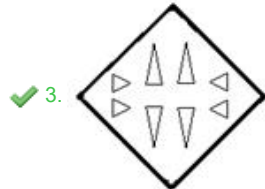
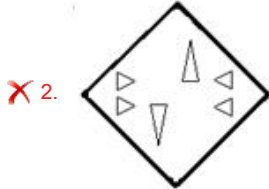
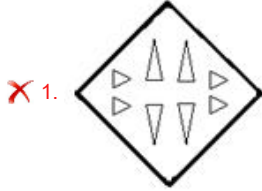
PRACTICE

MOCK

**Q.12** The sequence of folding a piece of paper and the manner in which the folded paper has been cut is shown in the following figures. How would this paper look when unfolded?



Ans



Question ID : 65497830883  
 Status : Answered  
 Chosen Option : 3

**Q.13** Select the number from among the given options that can replace the question mark (?) in the following series.

53, 74, 95, 116, ?

- Ans
- ✗ 1. 125
  - ✓ 2. 137
  - ✗ 3. 129
  - ✗ 4. 143

Question ID : 65497830894  
 Status : Answered  
 Chosen Option : 2

Q.14 In a class of 75 students, 40 students participate in Cricket, 28 students participate in Hockey, and 12 students participate in both Cricket and Hockey, whereas 19 students do not participate in any of the two sports. How many students participate only in Hockey?

- Ans
- 1. 28
  - 2. 44
  - 3. 16
  - 4. 35

Question ID : 65497830882  
Status : Answered  
Chosen Option : 4

Q.15 Select the combination of letters that when sequentially placed in the blanks of the given series will complete the series.

\_ a d f b \_ d f b a \_ f b a d \_

- Ans
- 1. a b f d
  - 2. b a d f
  - 3. d f b a
  - 4. b a f d

Question ID : 65497830892  
Status : Answered  
Chosen Option : 2

Q.16 In a certain code language, 'INAUGRAL' is written as 'UANILARG'. How will 'PROLIFER' be written in that language?

- Ans
- 1. LOPRERFJ
  - 2. RPLIFIRE
  - 3. ORPIFREF
  - 4. LORPREFI

Question ID : 65497830879  
Status : Answered  
Chosen Option : 4

Q.17 Nine students, Ajay, Gita, Navya, Vipin, Pinki, Kabir, Mohan, Saroj and Rani, are standing in a row from left to right according to decreasing order of their heights. Ajay is standing at the middle position. Mohan and Kabir are at the third position from the left and right side, respectively. Gita is at either of the ends of the row. Navya is standing to the immediate left of Ajay. Vipin is the tallest among all nine students. Rani is standing between Ajay and Kabir. Pinki is at the eighth position from the right.

Who is at the second position from the right?

- Ans
- 1. Mohan
  - 2. Pinki
  - 3. Saroj
  - 4. Kabir

Question ID : 65497830893  
Status : Answered  
Chosen Option : 3



Q.18 Select the option that is related to the third letter-cluster in the same way as the second letter-cluster is related to the first letter-cluster.

SNJ : UQL :: XPT : ?

- Ans
- 1. ZSV
  - 2. YSV
  - 3. YTW
  - 4. ZTU

Question ID : 65497830884  
Status : Answered  
Chosen Option : 1

Q.19 Select the option that is related to the third word in the same way as the second word is related to the first word.

Entomology : Insect :: Ichthyology : ?

- Ans
- 1. Bacteria
  - 2. Honey
  - 3. Coin
  - 4. Fish

Question ID : 65497830901  
Status : Answered  
Chosen Option : 1

Q.20 Select the correct option that indicates the arrangement of the given words in the order in which they appear in an English dictionary.

1. Delicious
2. Deliberate
3. Delinquent
4. Delirium
5. Delicacy

- Ans
- 1. 2, 5, 3, 4, 1
  - 2. 2, 5, 1, 4, 3
  - 3. 2, 5, 1, 3, 4
  - 4. 3, 5, 1, 4, 2

Question ID : 65497830891  
Status : Answered  
Chosen Option : 3

Q.21 In a certain code language, 'JAIPUR' is written as 'AJPIRU' and 'BHOPAL' is written as 'HBPOLA'. How will 'INDORE' be written in that language?

- Ans
- 1. NIODER
  - 2. DINRUP
  - 3. NDOIER
  - 4. DNEERO

Question ID : 65497830885  
Status : Answered  
Chosen Option : 1

**Q.22** Read the given statements and conclusions carefully. Assuming that the information given in the statements is true, even if it appears to be at variance with commonly known facts, decide which of the given conclusions logically follow(s) from the statements.

**Statements:**

1. Some flowers are chemicals.
2. Some chemicals are herbs.

**Conclusions:**

- I. No flower is a herb.
- II. Some flowers are herbs.

- Ans**
- 1. Either conclusion I or II follows
  - 2. Only conclusion II follows
  - 3. Only conclusion I follows
  - 4. Both conclusions I and II follow

Question ID : 65497830880

Status : Answered

Chosen Option : 1

**Q.23** Select the number from among the given options that can replace the question mark (?) in the following series.

6, 8, 20, 66, ?

- Ans**
- 1. 204
  - 2. 312
  - 3. 284
  - 4. 272

Question ID : 65497830889

Status : Answered

Chosen Option : 3

**Q.24** Five friends, Shruti, Shreya, Anup, Ankit and Kiran, are sitting in a row facing towards the south. Shruti is between Shreya and Anup. Kiran and Shreya are sitting at the extreme ends of the west and east, respectively. Who is sitting in the middle?

- Ans**
- 1. Ankit
  - 2. Shruti
  - 3. Kiran
  - 4. Anup

Question ID : 65497830902

Status : Answered

Chosen Option : 4

**Q.25** Select the option in which the numbers are related in the same way as are the numbers in the given set.

(8, 112, 49)

- Ans**
- 1. (15, 85, 25)
  - 2. (16, 117, 81)
  - 3. (12, 48, 64)
  - 4. (7, 154, 121)

Question ID : 65497830881

Status : Answered

Chosen Option : 4

Q.1 Who among the following is the recipient of the Nobel Prize for Literature in 2020?

- Ans
- 1. Kazuo Ishiguro
  - 2. Peter Handke
  - 3. Olga Tokarczuk
  - 4. Louise Glück

Question ID : 65497830915  
Status : Answered  
Chosen Option : 1

Q.2 Which city in Pakistan is the world's leading manufacturer of hand-sewn footballs?

- Ans
- 1. Islamabad
  - 2. Karachi
  - 3. Multan
  - 4. Sialkot

Question ID : 65497830926  
Status : Answered  
Chosen Option : 2

Q.3 According to the 'Chaturashrama' of the Vedic period, which of the following terms is related to the period of family life?

- Ans
- 1. Vanaprastha
  - 2. Brahmacharya
  - 3. Sanyasa
  - 4. Grihastha

Question ID : 65497830908  
Status : Answered  
Chosen Option : 1

Q.4 The chemical symbol of potassium is \_\_\_\_\_.

- Ans
- 1. Ca
  - 2. P
  - 3. Li
  - 4. K

Question ID : 65497830919  
Status : Answered  
Chosen Option : 4

Q.5 Who among the following is the sixth Guru of Sikhism?

- Ans
- 1. Guru Hargobind
  - 2. Guru Ram Das
  - 3. Guru Angad
  - 4. Guru Arjan

Question ID : 65497830909  
Status : Answered  
Chosen Option : 2

**Q.6** In Agenda 21 of Earth Summit 1992, what does 21 refer to?

- Ans
- 1. 21 months
  - 2. 21st century
  - 3. 21 official talks
  - 4. 21 countries

Question ID : 65497830918  
Status : Answered  
Chosen Option : 2

**Q.7** In which year did the Constituent Assembly of India adopt the National Anthem?

- Ans
- 1. 1950
  - 2. 1947
  - 3. 1952
  - 4. 1949

Question ID : 65497830910  
Status : Answered  
Chosen Option : 4

**Q.8** As of December 2020, which is the only country to win the 60-Over, 50-Over and 20-Over World Cup in Men's Cricket?

- Ans
- 1. Australia
  - 2. West Indies
  - 3. England
  - 4. India

Question ID : 65497830907  
Status : Answered  
Chosen Option : 4

**Q.9** Who among the following was roped in as ambassador of the BAFTA Breakthrough initiative in India in November 2020?

- Ans
- 1. Shahrukh Khan
  - 2. AR Rahman
  - 3. Deepika Padukone
  - 4. Akshay Kumar

Question ID : 65497830925  
Status : Answered  
Chosen Option : 4

**Q.10** Which is the element having the highest atomic mass among the following?

- Ans
- 1. Magnesium
  - 2. Calcium
  - 3. Chlorine
  - 4. Sulphur

Question ID : 65497830920  
Status : Answered  
Chosen Option : 2

Q.11 The five colours of the rings in the symbol of the Olympic Games are red, blue, green, yellow and \_\_\_\_\_.

- Ans
- 1. brown
  - 2. orange
  - 3. grey
  - 4. black

Question ID : 65497830928  
Status : Answered  
Chosen Option : 4

Q.12 Mount Adi Kailash is located in the state of \_\_\_\_\_.

- Ans
- 1. Arunachal Pradesh
  - 2. Sikkim
  - 3. Uttarakhand
  - 4. Himachal Pradesh

Question ID : 65497830927  
Status : Answered  
Chosen Option : 3

Q.13 While calculating GDP of India at factor cost, Central Statistical Office assesses the performance of how many different industries?

- Ans
- 1. 8
  - 2. 4
  - 3. 6
  - 4. 10

Question ID : 65497830905  
Status : Answered  
Chosen Option : 4

Q.14 In which place was the first session of Congress held in a rural area?

- Ans
- 1. Karumadi
  - 2. Punnapra
  - 3. Rampur
  - 4. Faizpur

Question ID : 65497830906  
Status : Answered  
Chosen Option : 3

Q.15 Which among the following cities is inscribed on the World Heritage list of the UNESCO?

- Ans
- 1. Bhopal
  - 2. Jaipur
  - 3. Cuttack
  - 4. Dharamshala

Question ID : 65497830912  
Status : Answered  
Chosen Option : 2

Q.16 Dhaulagiri is a peak in \_\_\_\_\_ Himalaya.

- Ans
- 1. Garhwal
  - 2. Kumaon
  - 3. Bhutan
  - 4. Nepal

Question ID : 65497830914  
Status : Answered  
Chosen Option : 2

Q.17 The Golden Quadrilateral that connects the four major cities of Delhi, Mumbai, Chennai and Kolkata is part of the \_\_\_\_\_ project.

- Ans
- 1. Bharatmala
  - 2. Shubhmala
  - 3. Sagarmala
  - 4. Deepmala

Question ID : 65497830913  
Status : Answered  
Chosen Option : 1

Q.18 Which of the following Articles of the Constitution of India contains the provision for early childhood care and education to children below the age of 6 years?

- Ans
- 1. Article 45
  - 2. Article 35
  - 3. Article 44
  - 4. Article 53

Question ID : 65497830924  
Status : Answered  
Chosen Option : 3

Q.19 Who among the following is the author of the novel 'Oliver Twist'?

- Ans
- 1. Charlotte Bronte
  - 2. EM Forster
  - 3. Thomas Hardy
  - 4. Charles Dickens

Question ID : 65497830922  
Status : Answered  
Chosen Option : 4

Q.20 Warli painting is a style of tribal art created by the people of the Warli Tribe of \_\_\_\_\_.

- Ans
- 1. Bihar
  - 2. Kerala
  - 3. Maharashtra
  - 4. Assam

Question ID : 65497830917  
Status : Answered  
Chosen Option : 2

Q.21 As per Swachh Survekshan 2020, which of the following is the cleanest cantonment?

- Ans
- 1. Varanasi
  - 2. New Delhi
  - 3. Jalandhar
  - 4. Ranchi

Question ID : 65497830923  
Status : Answered  
Chosen Option : 2

Q.22 What is the minimum amount of rainfall needed for groundnut cultivation during its growing season?

- Ans
- 1. 130 - 155 cm
  - 2. 20 - 40 cm
  - 3. 50 - 125 cm
  - 4. 30 - 45 cm

Question ID : 65497830904  
Status : Answered  
Chosen Option : 4

Q.23 Who among the following is NOT a professional badminton player?

- Ans
- 1. Saina Nehwal
  - 2. Sania Mirza
  - 3. Srikanth Kidambi
  - 4. PV Sindhu

Question ID : 65497830916  
Status : Answered  
Chosen Option : 2

Q.24 In November 2020, the Ministry of Shipping was renamed as the Ministry of Ports, Shipping and \_\_\_\_\_.

- Ans
- 1. Fisheries
  - 2. Water Wealth
  - 3. Waterways
  - 4. Water

Question ID : 65497830911  
Status : Answered  
Chosen Option : 3

Q.25 Chaitanya, also known as Sri Gauranga, was a popular Vaishnava saint and reformer from \_\_\_\_\_.

- Ans
- 1. Madurai
  - 2. Pandharpur
  - 3. Nadia
  - 4. Sringeri

Question ID : 65497830921  
Status : Answered  
Chosen Option : 3

Q.1 If the average of 23, 26,  $y$ ,  $y + 4$  and  $y + 7$  is 30, then the value of  $y$  is:

- Ans
- 1. 35
  - 2. 30
  - 3. 32
  - 4. 25

Question ID : 65497830941  
Status : Answered  
Chosen Option : 2

Q.2 A shopkeeper bought 6 pieces of TV sets at ₹21,000 each and sold all of them at a total price of ₹1,45,920. What was the total profit or loss percentage (correct to two decimal places)?

- Ans
- 1. Profit of 11.21%
  - 2. Loss of 12.71%
  - 3. Profit of 15.81%
  - 4. Loss of 21.19%

Question ID : 65497830936  
Status : Answered  
Chosen Option : 3

Q.3 The simple interest on a certain sum for 2 years at 10% per annum is half of the compound interest on a sum of ₹5,000 for 2 years at 10% per annum, interest compounded yearly. What is the sum placed on simple interest?

- Ans
- 1. ₹2,750
  - 2. ₹2,500
  - 3. ₹2,625
  - 4. ₹2,575

Question ID : 65497830952  
Status : Answered  
Chosen Option : 3

Q.4 What percentage of numbers from 1 to 40 has 1 or 9 in the unit's digit?

- Ans
- 1. 25.0
  - 2. 35.0
  - 3. 30.0
  - 4. 20.0

Question ID : 65497830947  
Status : Answered  
Chosen Option : 4

Q.5 The marked price of a fan is ₹1,780 and it is sold for ₹1,655.40. The percentage discount allowed is:

- Ans
- 1. 7%
  - 2. 6%
  - 3. 9%
  - 4. 5%

Question ID : 65497830938  
Status : Answered  
Chosen Option : 1



**Q.6** A train is going at  $\frac{1}{4}$  of its usual speed and it takes an extra 60 min to reach its destination. Find its usual time to cover the same distance.

- Ans**
- 1. 25 min
  - 2. 15 min
  - 3. 10 min
  - 4. 20 min

Question ID : 65497830949  
Status : Answered  
Chosen Option : 2

**Q.7** The speed of a car is  $1\frac{1}{5}$  times the speed of a bus. A train covers 1200 km in 15 hours. How much distance will the car cover in 7 hours if the speed of the bus is  $1\frac{1}{4}$  times the speed of the train?

- Ans**
- 1. 840 km
  - 2. 860 km
  - 3. 720 km
  - 4. 820 km

Question ID : 65497830944  
Status : Answered  
Chosen Option : 1

**Q.8** The value of  $\frac{43 + \frac{2}{7} \text{ of } 28 - 7}{(72 + 8 \times 2.5) - 1\frac{1}{8} \text{ of } (\frac{4}{3} - \frac{8}{9})}$  is:

- Ans**
- 1. 5
  - 2. 1
  - 3. 20
  - 4. 2

Question ID : 65497830940  
Status : Answered  
Chosen Option : 4

**Q.9** From a cuboid with sides 4 cm, 5 cm and 6 cm, cubes of side 1 cm have been removed from every corner. What is the volume of the remaining solid?

- Ans**
- 1.  $112 \text{ cm}^3$
  - 2.  $60 \text{ cm}^3$
  - 3.  $24 \text{ cm}^3$
  - 4.  $114 \text{ cm}^3$

Question ID : 65497830932  
Status : Answered  
Chosen Option : 1

Q.10 If the simple interest for five years is equal to 35% of the principal, then the rate of interest is:

- Ans
- 1. 9%
  - 2. 7%
  - 3. 8.5%
  - 4. 8%

Question ID : 65497830943  
Status : Answered  
Chosen Option : 2

Q.11 What is the value of

$$5 \div 10 \text{ of } 10 \times 4 + 4 \div 4 \text{ of } 4 \times 10 + (10 - 4) \div 16 \times 4?$$

- Ans
- 1.  $\frac{16}{5}$
  - 2.  $\frac{11}{5}$
  - 3.  $\frac{18}{5}$
  - 4.  $\frac{21}{5}$

Question ID : 65497830935  
Status : Answered  
Chosen Option : 2

Q.12 If the volume of a cube is  $175616 \text{ cm}^3$ , what is its side?

- Ans
- 1. 36 cm
  - 2. 66 cm
  - 3. 46 cm
  - 4. 56 cm

Question ID : 65497830953  
Status : Answered  
Chosen Option : 4

Q.13 A man sold an oven for ₹8,875 and made a profit of 25% in the process. What would have been his profit or loss per cent (up to two decimal places), had he sold it for ₹6,937?

- Ans
- 1. Loss, 2.30%
  - 2. Loss, 2.29%
  - 3. Profit, 2.30%
  - 4. Profit, 2.29%

Question ID : 65497830933  
Status : Answered  
Chosen Option : 2

**Q.14** The greatest three-digit number which is divisible by 14, 28 and 42 is:

- Ans**
- 1. 964
  - 2. 924
  - 3. 934
  - 4. 942

Question ID : 65497830939  
Status : Answered  
Chosen Option : 2

**Q.15** The average weight of 30 girls in a group is 35 kg. When a new girl is included, the average weight increases by 2 kg. What is the weight of the new girl?

- Ans**
- 1. 48 kg
  - 2. 64 kg
  - 3. 79 kg
  - 4. 97 kg

Question ID : 65497830945  
Status : Answered  
Chosen Option : 4

**Q.16** A can complete a project in 10 days and B can complete the same project in 15 days. A and B start working on the project together and A quits 5 days before the project is completed. In how many days is the project completed?

- Ans**
- 1. 9
  - 2. 5
  - 3. 10
  - 4. 7

Question ID : 65497830948  
Status : Answered  
Chosen Option : 4

**Q.17** Three numbers A, B and C are in the ratio 4 : 5 : 8. If each number is increased by 15%, 24% and 35%, respectively, then the new ratio of the numbers will be:

- Ans**
- 1. 23 : 31 : 54
  - 2. 21 : 31 : 54
  - 3. 23 : 31 : 44
  - 4. 23 : 33 : 54

Question ID : 65497830942  
Status : Answered  
Chosen Option : 4

**Q.18** A man sold an almirah for ₹960 at a loss of 4%. He then sold a folding bed for ₹840 at a profit of 20%. Find his profit or loss.

- Ans**
- 1. 100% loss
  - 2. ₹100 Profit
  - 3. ₹120 loss
  - 4. ₹340 profit

Question ID : 65497830950  
Status : Answered  
Chosen Option : 2

**Q.19** If ₹12,800 is invested in a bank for 5 years at the rate of 9% per annum simple interest, what amount is returned by the bank?

- Ans**
- 1. ₹18,560
  - 2. ₹18,650
  - 3. ₹5,760
  - 4. ₹19,694

Question ID : 65497830934  
Status : Answered  
Chosen Option : 1

**Q.20** Ram bought a chair at 35% discount on its marked price. Had Ram got no discount, he would have had to pay ₹245 more. How much did Ram pay for the chair?

- Ans**
- 1. ₹455
  - 2. ₹425
  - 3. ₹375
  - 4. ₹400

Question ID : 65497830946  
Status : Answered  
Chosen Option : 1

**Q.21** A bag contains ₹310 in the form of 5 rupee, 2 rupee and 1 rupee coins in the ratio 4 : 3 : 5. What is the number of 5 rupee coins?

- Ans**
- 1. 40
  - 2. 30
  - 3. 50
  - 4. 20

Question ID : 65497830951  
Status : Answered  
Chosen Option : 1

**Q.22** Which is the smallest number which when divided by 6, 8 and 10 leaves remainders 4, 6 and 8, respectively?

- Ans**
- 1. 120
  - 2. 58
  - 3. 122
  - 4. 118

Question ID : **65497830929**  
Status : **Answered**  
Chosen Option : **4**

**Q.23** A candidate scores 25% and fails by 32 marks, while another candidate who scores 40% marks, gets 28 marks more than the minimum required marks to pass the examination. How many marks did a candidate score if he scored 72% marks?

- Ans**
- 1. 400
  - 2. 132
  - 3. 288
  - 4. 204

Question ID : **65497830930**  
Status : **Answered**  
Chosen Option : **3**

**Q.24** A and B together can complete a certain work in 20 days, B and C together can complete it in 30 days and C and A together can complete it in 24 days. In how many days will A alone complete  $\frac{7}{12}$  part of the same work?

- Ans**
- 1. 30
  - 2. 20
  - 3. 48
  - 4. 80

Question ID : **65497830937**  
Status : **Answered**  
Chosen Option : **3**

**Q.25** What is the fourth proportional to 9, 21 and 123?

- Ans**
- 1. 728
  - 2. 278
  - 3. 287
  - 4. 246

Question ID : **65497830931**  
Status : **Answered**  
Chosen Option : **2**

Q.1 Select the most appropriate ANTONYM of the given word.

Discreet

- Ans  1. Tactless  
 2. Prudent  
 3. Proud  
 4. Reserved

Question ID : 65497830968  
Status : Answered  
Chosen Option : 2

Q.2 Select the option that can be used as a one-word substitute for the given group of words.

Not having knowledge or experience of a particular subject or activity

- Ans  1. Uninitiated  
 2. Expert  
 3. Unknown  
 4. Familiar

Question ID : 65497830964  
Status : Answered  
Chosen Option : 3

Q.3 Select the INCORRECTLY spelt word.

- Ans  1. Harassment  
 2. Suppress  
 3. Witness  
 4. Embarass

Question ID : 65497830965  
Status : Answered  
Chosen Option : 4

Q.4 Parts of the given sentence have been given as options. One of them contains a grammatical error. Select the option that has the error.

Please stay back for Sunnys first birthday celebration at Taj West End.

- Ans  1. Sunnys  
 2. first birthday celebration  
 3. at Taj West End  
 4. stay back

Question ID : 65497830970  
Status : Answered  
Chosen Option : 1

Q.5 Select the INCORRECTLY spelt word.

- Ans  1. Existence  
 2. Garantee  
 3. Believe  
 4. Consensus

Question ID : 65497830966  
Status : Answered  
Chosen Option : 2

Q.6 Select the most appropriate meaning of the given idiom.

Once and for all

- Ans
- 1. Rarely
  - 2. Finally
  - 3. Gradually
  - 4. Immediately

Question ID : 65497830956  
Status : Answered  
Chosen Option : 2

Q.7 Select the most appropriate option to fill in the blank.

I would \_\_\_\_\_ you to do yoga daily for at least 10 minutes.

- Ans
- 1. advise
  - 2. share
  - 3. order
  - 4. convey

Question ID : 65497830969  
Status : Answered  
Chosen Option : 1

Q.8 Select the most appropriate ANTONYM of the given word.

Dull

- Ans
- 1. Simple
  - 2. Unintelligent
  - 3. Disagreeable
  - 4. Exciting

Question ID : 65497830963  
Status : Answered  
Chosen Option : 4

Q.9 Select the most appropriate option to fill in the blank.

Permanent tissues are derived from meristematic tissues once they lose their \_\_\_\_\_ to divide.

- Ans
- 1. ability
  - 2. confidentiality
  - 3. intellectuality
  - 4. sentimentality

Question ID : 65497830957  
Status : Answered  
Chosen Option : 1



Q.10 Select the most appropriate synonym of the given word.

Mayhem

- Ans  1. Chaos  
 2. Order  
 3. Rebel  
 4. Plunder

Question ID : 65497830971  
Status : Answered  
Chosen Option : 1

Q.11 Select the most appropriate synonym of the given word.

Confine

- Ans  1. Ignore  
 2. Restrict  
 3. Allow  
 4. Open

Question ID : 65497830955  
Status : Answered  
Chosen Option : 2

Q.12 The following sentence has been split into four segments. Identify the segment that contains a grammatical error.

The players have admitted / to have done / a month's rigorous training / before the match.

- Ans  1. a month's rigorous training  
 2. to have done  
 3. before the match  
 4. The players have admitted

Question ID : 65497830962  
Status : Answered  
Chosen Option : 2

Q.13 Select the most appropriate meaning of the given idiom.

Under the weather

- Ans  1. Able to face the cold  
 2. Extremely active  
 3. Ready to go out  
 4. Slightly ill

Question ID : 65497830960  
Status : Answered  
Chosen Option : 3



Q.14 Select the option that can be used as a one-word substitute for the given group of words.

A game that no one wins

- Ans
- 1. Match
  - 2. Pastime
  - 3. Sport
  - 4. Draw

Question ID : 65497830961  
Status : Answered  
Chosen Option : 4

Q.15 Select the most appropriate option that can substitute the underlined word in the given sentence.

My teacher described an interesting slaughter she had with one of her students.

- Ans
- 1. encounter
  - 2. harbinger
  - 3. plunder
  - 4. volunteer

Question ID : 65497830959  
Status : Answered  
Chosen Option : 1

Q.16 Select the most appropriate option to fill in the blank.

Retail sales of consumer goods and automobiles witnessed a sharp spike during the \_\_\_\_\_ season.

- Ans
- 1. celebrated
  - 2. festive
  - 3. concert
  - 4. gala

Question ID : 65497830967  
Status : Answered  
Chosen Option : 2

Q.17 Select the most appropriate option that can substitute the underlined segment in the given sentence. If there is no need to substitute it, select 'No substitution required'.

I haven't found a job yet but I am going to keep trying.

- Ans
- 1. keep up trying
  - 2. keep to trying
  - 3. No substitution required
  - 4. keep on the trying

Question ID : 65497830973  
Status : Answered  
Chosen Option : 3

Q.18 Select the most appropriate option that can substitute the underlined word in the given sentence.

As a boy, Ravidas used to be very outspoken and avoided all company.

- Ans
- 1. vulnerable
  - 2. timid
  - 3. dashing
  - 4. bold

Question ID : 65497830958  
Status : Answered  
Chosen Option : 4

Q.19 Select the option that can be used as a one-word substitute for the given group of words.

The state of being married

- Ans
- 1. Matrilineal
  - 2. Material
  - 3. Matrimony
  - 4. Matriarchy

Question ID : 65497830972  
Status : Answered  
Chosen Option : 1

Q.20 The following sentence has been divided into parts. One of them may contain an error. Select the part that contains the error from the given options. If you don't find any error, select 'No error' as your answer.

John and I likes / to go fishing / in the evenings.

- Ans
- 1. No error
  - 2. John and I likes
  - 3. in the evenings
  - 4. to go fishing

Question ID : 65497830954  
Status : Answered  
Chosen Option : 2

**Comprehension:**

In the following passage, some words have been deleted. Read the passage carefully and select the most appropriate option to fill in each blank.

India remains one of the most ethnically diverse countries in the world. (1)\_\_\_\_\_ from its many religions and sects, India (2)\_\_\_\_\_ home to innumerable castes and tribes, as well (3)\_\_\_\_\_ to more than a dozen major and (4)\_\_\_\_\_ of minor linguistic groups from (5)\_\_\_\_\_ language families unrelated to one another.

SubQuestion No : 21

Q.21 Select the most appropriate option to fill in blank no. 1.

- Ans
- 1. Separate
  - 2. Together
  - 3. Outside
  - 4. Apart

Question ID : 65497830975  
Status : Answered  
Chosen Option : 4

**Comprehension:**

In the following passage, some words have been deleted. Read the passage carefully and select the most appropriate option to fill in each blank.

India remains one of the most ethnically diverse countries in the world. (1)\_\_\_\_\_ from its many religions and sects, India (2)\_\_\_\_\_ home to innumerable castes and tribes, as well (3)\_\_\_\_\_ to more than a dozen major and (4)\_\_\_\_\_ of minor linguistic groups from (5)\_\_\_\_\_ language families unrelated to one another.

**SubQuestion No : 22**

**Q.22** Select the most appropriate option to fill in blank no. 2.

- Ans  1. were  
 2. be  
 3. am  
 4. is

Question ID : 65497830976  
Status : Answered  
Chosen Option : 4

**Comprehension:**

In the following passage, some words have been deleted. Read the passage carefully and select the most appropriate option to fill in each blank.

India remains one of the most ethnically diverse countries in the world. (1)\_\_\_\_\_ from its many religions and sects, India (2)\_\_\_\_\_ home to innumerable castes and tribes, as well (3)\_\_\_\_\_ to more than a dozen major and (4)\_\_\_\_\_ of minor linguistic groups from (5)\_\_\_\_\_ language families unrelated to one another.

**SubQuestion No : 23**

**Q.23** Select the most appropriate option to fill in blank no. 3.

- Ans  1. as  
 2. with  
 3. so  
 4. by

Question ID : 65497830977  
Status : Answered  
Chosen Option : 1

**Comprehension:**

In the following passage, some words have been deleted. Read the passage carefully and select the most appropriate option to fill in each blank.

India remains one of the most ethnically diverse countries in the world. (1)\_\_\_\_\_ from its many religions and sects, India (2)\_\_\_\_\_ home to innumerable castes and tribes, as well (3)\_\_\_\_\_ to more than a dozen major and (4)\_\_\_\_\_ of minor linguistic groups from (5)\_\_\_\_\_ language families unrelated to one another.

**SubQuestion No : 24**

**Q.24** Select the most appropriate option to fill in blank no. 4.

- Ans  1. hundreds  
 2. loads  
 3. sufficient  
 4. ample

Question ID : 65497830978  
Status : Answered  
Chosen Option : 1

**Comprehension:**

In the following passage, some words have been deleted. Read the passage carefully and select the most appropriate option to fill in each blank.

India remains one of the most ethnically diverse countries in the world. (1)\_\_\_\_\_ from its many religions and sects, India (2)\_\_\_\_\_ home to innumerable castes and tribes, as well (3)\_\_\_\_\_ to more than a dozen major and (4)\_\_\_\_\_ of minor linguistic groups from (5)\_\_\_\_\_ language families unrelated to one another.

**SubQuestion No : 25**

**Q.25** Select the most appropriate option to fill in blank no. 5.

- Ans  1. several  
 2. abundant  
 3. quite  
 4. moderate

Question ID : 65497830979  
Status : Answered  
Chosen Option : 1

**Section : Part D Hindi**

**Q.1** दिए गए वाक्य का वह भाग ज्ञात करें जिसमें कोई त्रुटि है। यदि कोई त्रुटि नहीं है, तो 'कोई त्रुटि नहीं है' विकल्प को चुनें।

सुषमा घी से रोटी बनाई।

- Ans  1. सुषमा  
 2. कोई त्रुटि नहीं  
 3. रोटी बनाई  
 4. घी से

Question ID : 65497830983  
Status : Not Answered  
Chosen Option : --

**Q.2** 'जिसकी तुलना न की जा सके' वाक्यांश के लिए एक शब्द होगा-

- Ans  1. अन्यमनस्क  
 2. अनुपम  
 3. तुलनीय  
 4. अतुलनीय

Question ID : 65497830999  
Status : Not Answered  
Chosen Option : --

**Q.3** रिक्त स्थान की पूर्ति के लिए सबसे उपयुक्त शब्द का चयन करें-

\_\_\_\_\_ तुम निर्भय हो उतने ही ईमानदार भी हो।

- Ans  1. जितने  
 2. कितने  
 3. जैसे  
 4. वैसे

Question ID : 65497830989  
Status : Not Answered  
Chosen Option : --

Q.4 सही वर्तनी वाले शब्द का चयन करें।

- Ans  1. अविस्मरणीय  
 2. अविस्मरणिय  
 3. अविस्मरणीय  
 4. अविस्मर्णीय

Question ID : 65497830992  
Status : Not Answered  
Chosen Option : --

Q.5 'आँख खुलना' मुहावरे का अर्थ बताइए-

- Ans  1. क्रोध आना  
 2. सावधान होना  
 3. जानकार होना  
 4. सोकर उठना

Question ID : 65497830988  
Status : Not Answered  
Chosen Option : --

Q.6 दिए गए शब्द के समानार्थी शब्द का चयन करें।

आँसू

- Ans  1. जुल्फ  
 2. व्यादा  
 3. नीर  
 4. अश्रु

Question ID : 65497830984  
Status : Not Answered  
Chosen Option : --

Q.7 सही वर्तनी वाले शब्द का चयन करें।

- Ans  1. अर्धवारषिक  
 2. अरधवार्षिक  
 3. अर्धवार्षिक  
 4. अर्धवार्षिक

Question ID : 65497830993  
Status : Not Answered  
Chosen Option : --

Q.8 दिए गए शब्द के समानार्थी शब्द का चयन करें।

राजा

- Ans  1. वृन्द  
 2. यति  
 3. विप्र  
 4. नृप

Question ID : 65497830996  
Status : Not Answered  
Chosen Option : --

Q.9 दिए गए वाक्य का वो भाग ज्ञात करें जिसमें कोई त्रुटि है। यदि कोई त्रुटि नहीं है, तो 'कोई त्रुटि नहीं है' चुनें।

शिकारी ने (1) भूख से मचलते हुए (2) हिरण को छोड़ दिया। (3) कोई त्रुटि नहीं है (4)

- Ans
- 1. 4
  - 2. 3
  - 3. 2
  - 4. 1

Question ID : 65497830985  
Status : Not Answered  
Chosen Option : --

Q.10 विकल्पों में से कौन सा निम्न शब्द का विलोम नहीं है-

कल्पित

- Ans
- 1. यथार्थ
  - 2. अकल्पित
  - 3. अयथार्थ
  - 4. वास्तविक

Question ID : 65497830990  
Status : Not Answered  
Chosen Option : --

Q.11 दिए गए वाक्य का वह भाग ज्ञात करें जिसमें कोई त्रुटि है। यदि कोई त्रुटि नहीं है, तो 'कोई त्रुटि नहीं है' चुनें।

मैंने तुम्हें (1) अनेको बार (2) कहा है (3) कोई त्रुटि नहीं है (4)

- Ans
- 1. 3
  - 2. 4
  - 3. 2
  - 4. 1

Question ID : 65497830995  
Status : Not Answered  
Chosen Option : --

Q.12 दिए गए वाक्य में रेखांकित खंड को प्रतिस्थापित करने के लिए सबसे उपयुक्त विकल्प का चयन करें। यदि इसे प्रतिस्थापित करने की आवश्यकता नहीं है, तो विकल्प 'किसी बदलाव की आवश्यकता नहीं है' का चयन करें।

भोजन करके हमने यात्रा प्रारंभ किया।

- Ans
- 1. प्रारंभ किए
  - 2. प्रारंभ किया
  - 3. प्रारंभ की
  - 4. किसी बदलाव की आवश्यकता नहीं है।

Question ID : 65497830982  
Status : Not Answered  
Chosen Option : --

Q.13 राज्य के प्रति द्रोह करनेवाला - वाक्यांश के लिए एक शब्द चुनिए।

- Ans  1. राजद्रोही  
 2. शहीद  
 3. राष्ट्रप्रेमी  
 4. राज्य

Question ID : 65497830980  
Status : Not Answered  
Chosen Option : --

Q.14 दिए गये वाक्यांश के लिए एक शब्द दीजिये।

जिसकी गिनती न की जा सके

- Ans  1. अगणनीय  
 2. अकरणीय  
 3. अगङ्नीय  
 4. अकर्मणीय

Question ID : 65497830987  
Status : Not Answered  
Chosen Option : --

Q.15 दिए गए शब्द के विलोम शब्द का चयन करें।

कर्कश

- Ans  1. मधुर  
 2. कड़वा  
 3. कटु  
 4. मधुप

Question ID : 65497830986  
Status : Not Answered  
Chosen Option : --

Q.16 दिए गए वाक्य में रेखांकित खंड को प्रतिस्थापित करने के लिए सबसे उपयुक्त विकल्प का चयन करें।  
यदि इसे प्रतिस्थापित करने की आवश्यकता नहीं है, तो विकल्प 'किसी बदलाव की आवश्यकता नहीं है'  
का चयन करें।

कामिनी को अपने माता-पिता के वचनो के ऊपर श्रद्धा थी।

- Ans  1. किसी बदलाव की आवश्यकता नहीं है।  
 2. वचन ऊपर  
 3. वचन के ऊपर  
 4. वचनो पर

Question ID : 65497830994  
Status : Not Answered  
Chosen Option : --

Q.17 रिक्त स्थान की पूर्ति के लिए सबसे उपयुक्त शब्द का चयन कीजिए।

भारतीय सस्कृति को मैंने \_\_\_\_\_ में देखा।

- Ans
- 1. गलियो-गलियो
  - 2. गाँवो-गाँवो
  - 3. गाँव-गाँव
  - 4. नगरो-नगरो

Question ID : 65497830981  
Status : Not Answered  
Chosen Option : --

Q.18 नीचे दिए वाक्य में रिक्त-स्थान की पूर्ति के लिए सबसे उपयुक्त शब्द का चयन करें।

पत्ता \_\_\_\_\_ है तो भी कुत्ते भौकते हैं।

- Ans
- 1. फड़फड़ाता
  - 2. खड़कता
  - 3. सरकता
  - 4. फड़कता

Question ID : 65497830997  
Status : Not Answered  
Chosen Option : --

Q.19 दिए गए वाक्य में रेखांकित खंड को प्रतिस्थापित करने के लिए सबसे उपयुक्त विकल्प का चयन करें।  
यदि इसे प्रतिस्थापित करने की आवश्यकता नहीं है, तो विकल्प 'किसी बदलाव की आवश्यकता नहीं है'  
का चयन करें।

हवा का हल्का-सा झोका आया।

- Ans
- 1. धोका
  - 2. ढोका
  - 3. किसी बदलाव की आवश्यकता नहीं है।
  - 4. झापटा

Question ID : 65497830998  
Status : Not Answered  
Chosen Option : --

Q.20 उस विकल्प का चयन करें जो नीचे दिए गये मुहावरे का अर्थ व्यक्त करता है-

जी को रोग लगाना

- Ans
- 1. दिल धबराना
  - 2. उम्मीद न रहना
  - 3. फिक्र में रहना
  - 4. रज होना

Question ID : 65497830991  
Status : Not Answered  
Chosen Option : --



**Comprehension:**

नीचे दिए गए गद्यांश में से कुछ शब्द हटा दिए गए हैं। संबंधित प्रश्नों में प्रत्येक सख्खा के लिए सबसे उपयुक्त विकल्प का चयन करें।

स्वतंत्रता का इतिहास बलिदानों का इतिहास है। हमें (1) \_\_\_\_\_ भीख में नहीं मिली। उसे पाने के लिए (2) \_\_\_\_\_ सघर्ष करना पड़ा। कितने ही युवकों को प्राणों की बलि देनी पड़ी। सन् 1857 में (3) \_\_\_\_\_ स्वतंत्रता संग्राम हुआ। उसमें लक्ष्मीबाई, तात्याटोपे, बहादुर शाह ज़फर जैसे अनेक (4) \_\_\_\_\_ ने बलिदान दिया। उस सघर्ष के बाद अंग्रेज़ों ने भारत पर खूब अत्याचार किए। कुछ सालों तक सघर्ष रूक गया। किंतु आज़ादी की (5) \_\_\_\_\_ सुलगती रही।

**SubQuestion No : 21**

Q.21 गद्यांश के रिक्त स्थान (1) के लिए सर्वाधिक उपयुक्त शब्द होगा-

- Ans
- 1. राजतंत्र
  - 2. स्वतंत्रता
  - 3. लोकतंत्र
  - 4. परतंत्रता

Question ID : 65497831001  
Status : Not Answered  
Chosen Option : --

**Comprehension:**

नीचे दिए गए गद्यांश में से कुछ शब्द हटा दिए गए हैं। संबंधित प्रश्नों में प्रत्येक सख्खा के लिए सबसे उपयुक्त विकल्प का चयन करें।

स्वतंत्रता का इतिहास बलिदानों का इतिहास है। हमें (1) \_\_\_\_\_ भीख में नहीं मिली। उसे पाने के लिए (2) \_\_\_\_\_ सघर्ष करना पड़ा। कितने ही युवकों को प्राणों की बलि देनी पड़ी। सन् 1857 में (3) \_\_\_\_\_ स्वतंत्रता संग्राम हुआ। उसमें लक्ष्मीबाई, तात्याटोपे, बहादुर शाह ज़फर जैसे अनेक (4) \_\_\_\_\_ ने बलिदान दिया। उस सघर्ष के बाद अंग्रेज़ों ने भारत पर खूब अत्याचार किए। कुछ सालों तक सघर्ष रूक गया। किंतु आज़ादी की (5) \_\_\_\_\_ सुलगती रही।

**SubQuestion No : 22**

Q.22 गद्यांश के रिक्त स्थान (2) के लिए सर्वाधिक उपयुक्त शब्द होगा-

- Ans
- 1. साधारण
  - 2. आसान
  - 3. कठिन
  - 4. असामान्य

Question ID : 65497831002  
Status : Not Answered  
Chosen Option : --

**Comprehension:**

नीचे दिए गए गद्यांश में से कुछ शब्द हटा दिए गए हैं। संबंधित प्रश्नों में प्रत्येक सख्खा के लिए सबसे उपयुक्त विकल्प का चयन करें।

स्वतंत्रता का इतिहास बलिदानों का इतिहास है। हमें (1) \_\_\_\_\_ भीख में नहीं मिली। उसे पाने के लिए (2) \_\_\_\_\_ सघर्ष करना पड़ा। कितने ही युवकों को प्राणों की बलि देनी पड़ी। सन् 1857 में (3) \_\_\_\_\_ स्वतंत्रता संग्राम हुआ। उसमें लक्ष्मीबाई, तात्याटोपे, बहादुर शाह ज़फर जैसे अनेक (4) \_\_\_\_\_ ने बलिदान दिया। उस सघर्ष के बाद अंग्रेज़ों ने भारत पर खूब अत्याचार किए। कुछ सालों तक सघर्ष रूक गया। किंतु आज़ादी की (5) \_\_\_\_\_ सुलगती रही।

**SubQuestion No : 23**

Q.23 गद्यांश के रिक्त स्थान (3) के लिए सर्वाधिक उपयुक्त शब्द होगा-

- Ans
- 1. चतुर्थ
  - 2. तृतीय
  - 3. द्वितीय
  - 4. प्रथम

Question ID : 65497831003  
Status : Not Answered  
Chosen Option : --

**Comprehension:**

नीचे दिए गए गद्यांश में से कुछ शब्द हटा दिए गए हैं। संबंधित प्रश्नों में प्रत्येक सख्खा के लिए सबसे उपयुक्त विकल्प का चयन करें।

स्वतंत्रता का इतिहास बलिदानों का इतिहास है। हमें (1) \_\_\_\_\_ भीख में नहीं मिली। उसे पाने के लिए (2) \_\_\_\_\_ सघर्ष करना पड़ा। कितने ही युवकों को प्राणों की बलि देनी पड़ी। सन् 1857 में (3) \_\_\_\_\_ स्वतंत्रता संग्राम हुआ। उसमें लक्ष्मीबाई, तात्याटोपे, बहादुर शाह ज़फर जैसे अनेक (4) \_\_\_\_\_ ने बलिदान दिया। उस सघर्ष के बाद अंग्रेज़ों ने भारत पर खूब अत्याचार किए। कुछ सालों तक सघर्ष रूक गया। किंतु आज़ादी की (5) \_\_\_\_\_ सुलगती रही।

**SubQuestion No : 24**

Q.24 गद्यांश के रिक्त स्थान (4) के लिए सर्वाधिक उपयुक्त शब्द होगा-

- Ans
- 1. दीवानो
  - 2. सेनानियो
  - 3. बहादुरो
  - 4. सैनिको

Question ID : 65497831004

Status : Not Answered

Chosen Option : --

**Comprehension:**

नीचे दिए गए गद्यांश में से कुछ शब्द हटा दिए गए हैं। संबंधित प्रश्नों में प्रत्येक सख्खा के लिए सबसे उपयुक्त विकल्प का चयन करें।

स्वतंत्रता का इतिहास बलिदानों का इतिहास है। हमें (1) \_\_\_\_\_ भीख में नहीं मिली। उसे पाने के लिए (2) \_\_\_\_\_ सघर्ष करना पड़ा। कितने ही युवकों को प्राणों की बलि देनी पड़ी। सन् 1857 में (3) \_\_\_\_\_ स्वतंत्रता संग्राम हुआ। उसमें लक्ष्मीबाई, तात्याटोपे, बहादुर शाह ज़फर जैसे अनेक (4) \_\_\_\_\_ ने बलिदान दिया। उस सघर्ष के बाद अंग्रेज़ों ने भारत पर खूब अत्याचार किए। कुछ सालों तक सघर्ष रूक गया। किंतु आज़ादी की (5) \_\_\_\_\_ सुलगती रही।

**SubQuestion No : 25**

Q.25 गद्यांश के रिक्त स्थान (5) के लिए सर्वाधिक उपयुक्त शब्द होगा-

- Ans
- 1. चिनगारी
  - 2. वायु
  - 3. लकड़ी
  - 4. लपट

Question ID : 65497831005

Status : Not Answered

Chosen Option : --